

Grassroots Workshops

ROBERT KAPLINSKY



@robertkaplinsky



Goals

- Engaging problem solving
 - Real world problem-based learning
 - Higher depth of knowledge problems
- Better implementation
 - Improve our ability to ask questions
 - Practice preparing to implement a lesson
 - Figure out how to deal with uncomfortable situations









DOUBLE-DOUBLE[®] *Double Meat & Double Cheese* **2⁶⁵**

CHEESEBURGER **1⁷⁵**

HAMBURGER **1⁵⁰**

FRENCH FRIES **1⁰⁵**

SHAKES *Chocolate
Strawberry
Vanilla* **1⁵⁵**

<u>SM</u>	<u>MED</u>	<u>LG</u>	<u>X-LG</u>
99	1¹⁰	1²⁹	1⁴⁹
COKE <i>Classic or Diet</i>			
SEVEN-UP			
ROOT BEER			
DR PEPPER			
LEMONADE			
ICED TEA			

MILK **70**
COFFEE **70**



OPEN 10:30 a.m. to 1:00 a.m.
.....**Fri. and Sat. until 1:30 a.m.**

2004-10-31

8:21 PM

YOUR GUEST NUMBER IS
98

IN-N-OUT BURGER LAS VEGAS EASTERN
2004-10-31

165 1 5 98

8:21 PM

Cashier: SAM

GUEST #: 98

Counter-Eat In

Db Db	2.65
98 Meat Pty XChz	88.20
Counter-Eat In	90.85
TAX 7.50%	6.81
Amount Due	97.66
CASH TENDER	\$97.66
Change	\$.00

2004-10-31

Cashier: SAM

GUEST #: 98


Counter-Eat In

Db Db	2.65
98 Meat Pty XChz	88.20
Counter-Eat In	90.85
TAX 7.50%	6.81
Amount Due	97.66
CASH TENDER	\$97.66
Change	\$.00

2004-10-31

8:21 PM

	Serving Size (g)	Calories
Hamburger w/Onion	243	390
Cheeseburger w/Onion	268	480
Double-Double w/Onion	330	670



•

• Cohherence

•

• Rigor

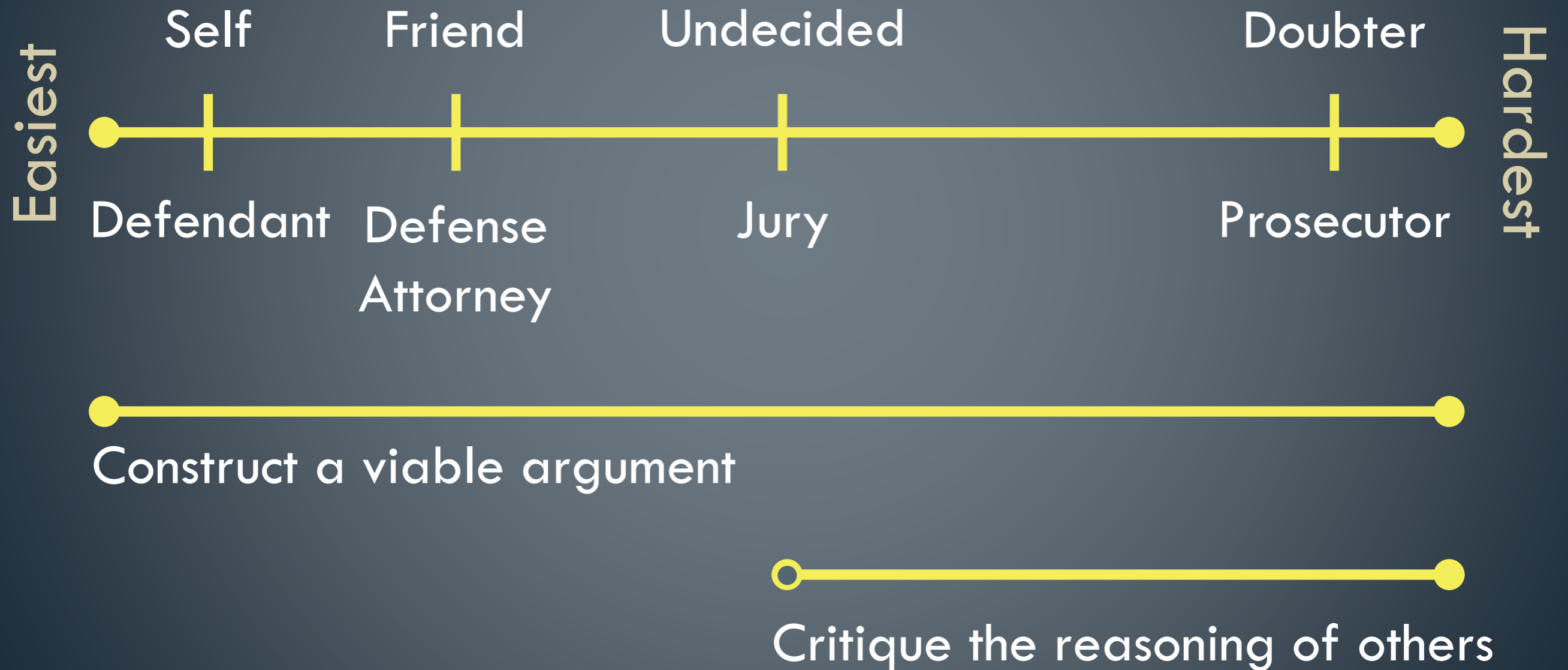
•

Layers	Cost
1	\$1.75
2	\$2.65
3	\$3.55
4	\$4.45
.	.
.	.
20	\$18.85
.	.
.	.
100	\$90.85
.	.
.	.
N	$\$1.75 + (N-1)*\0.90

Standards for Mathematical Practice

1. Make sense of problems and persevere in solving them.
2. Reason abstractly and quantitatively.
3. Construct viable arguments and critique the reasoning of others.

Levels of Convincing



Inspired by *Connecting Mathematical Ideas* by Jo Boaler and Cathy Humphreys

bun + produce + meat + cheese + meat + cheese = \$2.65

bun + produce + meat + cheese = \$1.75

meat + cheese = \$0.90

The Reality

- Students needed guidance to figure out a layer's cost
- Not every class is ready to go straight to 100x100
- Common wrong answers included:
 - \$175.00 ($\1.75×100 cheeseburgers)
 - \$132.50 ($\2.65×50 Double-Doubles)
- Students had equations that had more than X patties
- Students were surprised to see three different equations:
 - Starting with a Double-Double
 - Starting with a cheeseburger
 - Starting with produce and bun only

STUDENT WORK

What problem are you trying to figure out?	
<p>How much does a 100x100 burger cost?</p> <p style="text-align: right;">Regular (one patty) \$1.25</p> <p style="text-align: center;">\$132.50</p>	
What do you already know from the problem?	What do you need to know to solve the problem?
<ul style="list-style-type: none"> • there's 100 beef patties • costs 2.50 	<ul style="list-style-type: none"> • How much does a regular cheeseburger cost. 2.50 - <p style="text-align: center;">OP.</p> <p style="text-align: center;">OP. OP.</p>
What is your conclusion?	
<p>To get the answer, I first figured out what the price of a regular & double-double cheeseburgers are. From there I subtracted the price of the produce & buns, then multiplied by 100. That gave me the answer, which I once again had to add the price of the buns & produce.</p> <p style="text-align: center;"> $22.8 + 00.1 - xOP_0 = P$ $128.0 + xOP_0 = P$ </p>	

What is your conclusion?

The only difference between a double double and a cheeseburger is one patty and one slice of cheese. So you subtract the prices of the two to find the price of only one patty & cheese. You then use that number (.90) & subtract it from the cost of one whole cheeseburger to find the price of all the extra stuff. Multiply by 100

What is your conclusion?

A 100x100 at In-n-Out cost \$90.85. To solve that, you start by subtracting the price of a cheeseburger from a double double. The answer (.90) is the price of a patty and cheese slice. You multiply (.90) by one less patty than what you want. (x-1), and you add the price of a cheeseburger (1.75). You end up with the eq. $[y = .90(x-1) + 1.75]$. For the 100x100, you plug in 100 to the (x) and you end up with \$90.85.

$$\left[\begin{array}{l} y = .90(100-1) + 1.75 \\ y = 89.10 + 1.75 \\ y = 90.85 \end{array} \right]$$



What is your conclusion?


Figure the price difference from the Double-Double with a cheeseburger.
Then find out the price for the produce and cheese-beef.

get total into \$90.85

CHOOSE CAR SEAT:
BY AGE & SIZE



THE NUMBER
OF PEOPLE
**WHO
THINK**
THEY HAVE
THEIR CHILD IN
THE RIGHT
SEAT.



THE ONES
**WHO
ACTUALLY
DO.**

KNOW FOR SURE
IF YOUR CHILD IS IN THE RIGHT CAR SEAT.




VISIT SAFERCAR.GOV/THERIGHTSEAT



CHOOSE CAR SEAT:
BY AGE & SIZE



THE NUMBER
OF PEOPLE
**WHO
THINK**
THEY HAVE
THEIR CHILD
IN THE RIGHT
SEAT.



THE ONES
**WHO
ACTUALLY
DO.**

KNOW FOR SURE
IF YOUR CHILD IS IN THE RIGHT CAR SEAT.

VISIT SAFERCAR.GOV/THERIGHTSEAT



There are 125
sheep and 5 dogs
in a flock. How old
is the shepherd?

Of the 32 students I interviewed...

- 75% of them gave me numerical responses
- 2 students calculated the answer to be 130 ($125 + 5$)
- 2 students calculated the answer to be 120 ($125 - 5$)
- 12 students calculated the answer to be 25 ($125 \div 5$)
- 0 students calculated the answer to be 625 (125×5)
- 4 students stated that they guessed their answer (90, 5, 42, and 50)
- 4 students tried to divide 125 by 5 but could not correctly implement the procedure

Takeaways

- Making sense of mathematics
- Intellectual autonomy
 - Intellectual autonomy is about being able to think for yourself and not being dependent on others for the direction and control of one's thinking.

What Does the NHTSA Say?

Key Statistics and Consumer Insights:

- Motor vehicle crashes are the leading cause of death for children age 1 through 12 years old.¹

According to a NHTSA study, 3 out of 4 kids are not as secure in the car as they should be because their car seats are not being used correctly.


be reduced by about half if the correct child safety seats were always used.

¹ Source: Based on the latest mortality data currently available from the CDC's National Center for Health Statistics.



CHOOSE CAR SEAT:
BY AGE & SIZE

THE NUMBER
OF PEOPLE
**WHO
THINK**
THEY HAVE
THEIR CHILD
IN THE RIGHT
SEAT.



THE ONES
**WHO
ACTUALLY
DO.**

- “because they have their child in the right seat”
- “because their car seats are not being used correctly”

IF YOUR CHILD IS IN THE RIGHT CAR SEAT.



VISIT SAFERCAR.GOV/THERIGHTSEAT




CHOOSE CAR SEAT:
BY AGE & SIZE



THE NUMBER
OF PEOPLE

**WHO
THINK**

THEIR CAR
SEATS ARE
BEING USED
CORRECTLY.



THE ONES
**WHO
ACTUALLY
DO.**

KNOW FOR SURE
IF YOUR CHILD IS IN THE RIGHT CAR SEAT.



VISIT SAFERCAR.GOV/THERIGHTSEAT



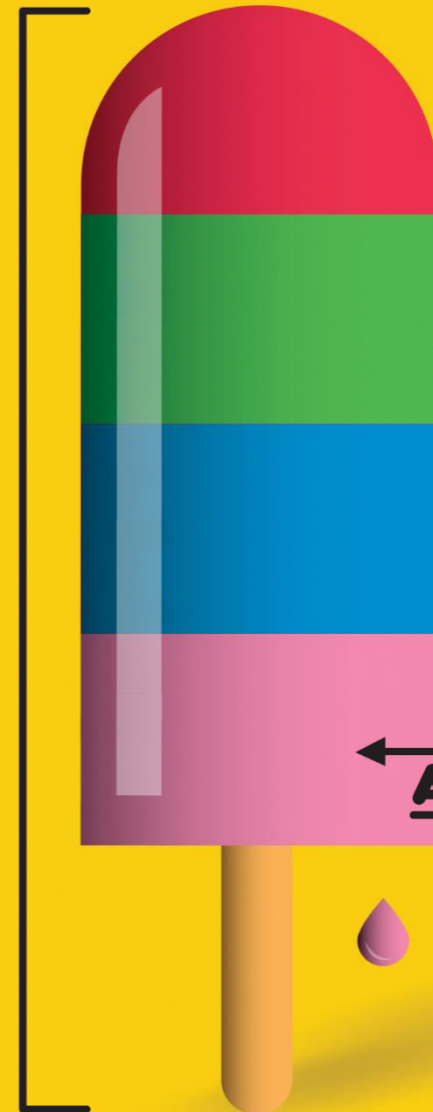
CHOOSE CAR SEAT:
BY AGE & SIZE



THE NUMBER
OF PEOPLE

**WHO
THINK**

THEIR CAR
SEATS ARE
BEING USED
CORRECTLY.



THE ONES
**WHO
ACTUALLY
DO.**

KNOW FOR SURE
IF YOUR CHILD IS IN THE RIGHT CAR SEAT.

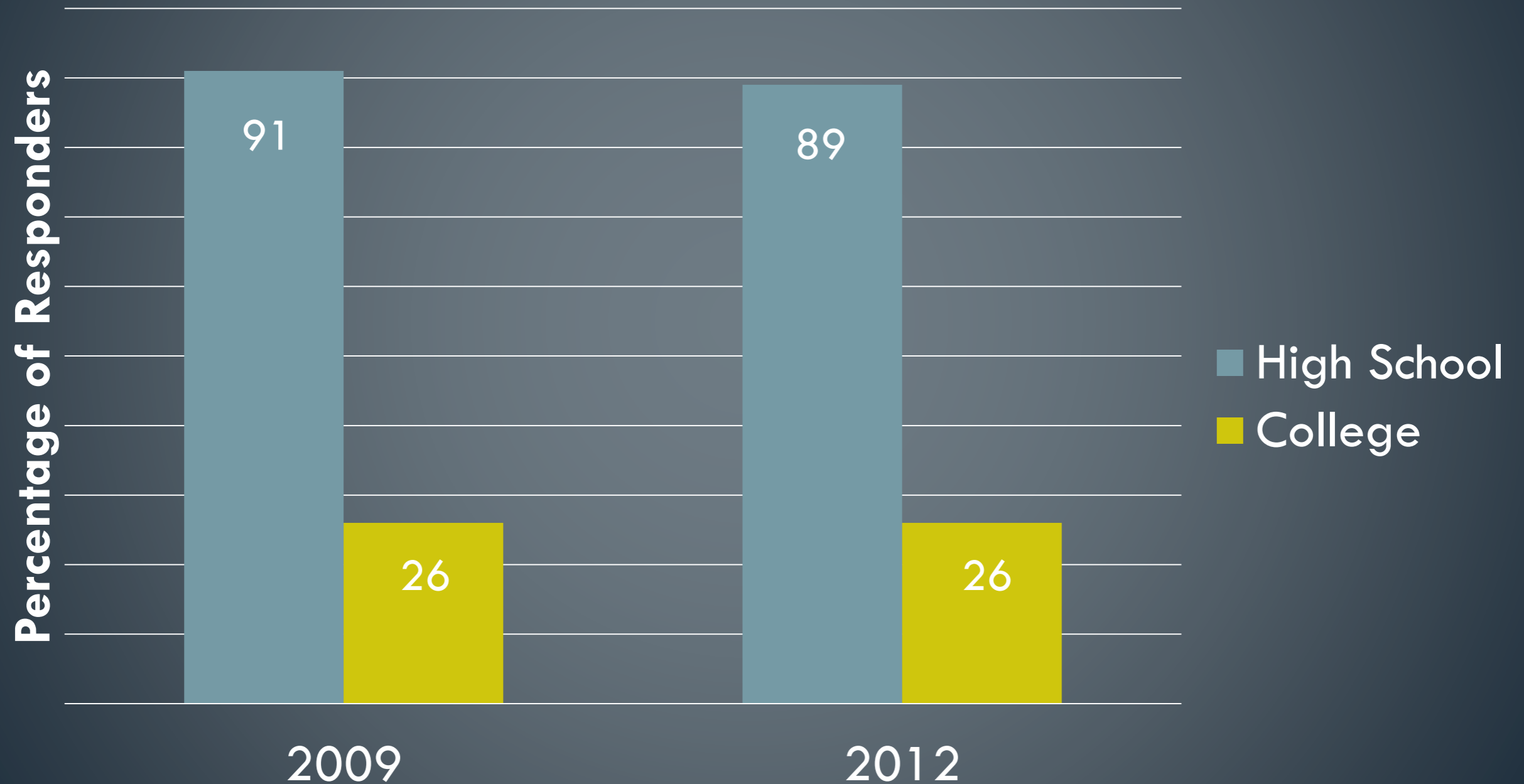
VISIT SAFERCAR.GOV/THERIGHTSEAT



***WHAT IS THE
PURPOSE OF
A K-12
EDUCATION?***

- College readiness
 - ACT National Curriculum Survey
 - Surveyed 9,937 educators

“Well” or “Very Well” Prepared for College



WHAT IS THE PURPOSE OF A K-12 EDUCATION?

- College readiness
- Career readiness
 - Association of American Colleges and Universities survey
 - Surveyed over 300 employers with at least 25 employees and many new hires

■ More ■ Less ■ Same

Critical thinking and analytical reasoning skills

Analyzing and solving complex problems

Communicating effectively orally and in writing

Applying knowledge and skills to real-world setting

Working w/ numbers and understanding statistics









Sinkhole Dimensions

- Slate: “A sinkhole, 65 feet across and 100 feet deep”



How To Fix a Giant Sinkhole

The cement method vs. the graded-filter technique.



18

0

By Brian Palmer



A sinkhole in Guatamala

It's not clear whether cement is the best option, however. A 6,500-cubic-foot wad of concrete may serve to concentrate water runoff in other areas, leading to more sinkholes. Many engineers prefer the **graded-filter technique**, in which the hole is filled with a layer of boulders, then a layer of smaller rocks, and, finally, a layer of gravel. This fills the hole, more or less, while permitting water to drain through the area.

Reply

Reply All

Forward



2010 Guatemalan Sinkhole

Kaplinsky, Robert

To:



Wednesday, February 06, 2013 1:39 PM

Hi Brian,

I am using your "How to Fix a Giant Sinkhole" article for a math lesson on volume of a cylinder. I have one question for you. You mentioned.

"It's not clear whether cement is the best option, however. A 6,500-cubic-foot wad of concrete may serve to concentrate water runoff in other areas, leading to more sinkholes."

Can you please tell me where you got 6500 cubic feet from? Did you do 65×100 ? We get something closer to 342,000 cubic feet.

Thanks,
Robert

[Reply](#)

[Reply All](#)

[Forward](#)



Re: 2010 Guatemalan Sinkhole

Brian Palmer

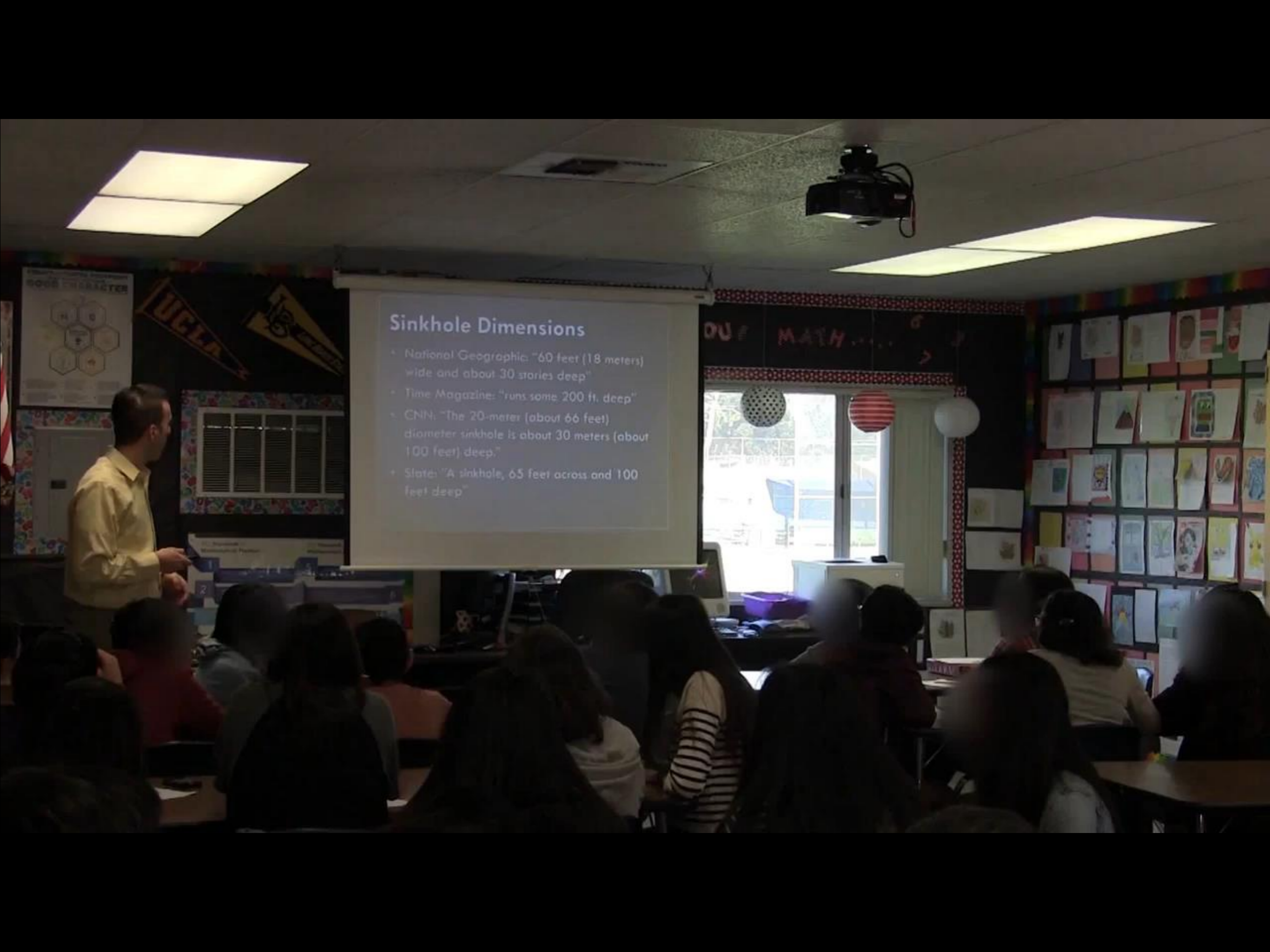
To: [Kaplinsky, Robert](#)

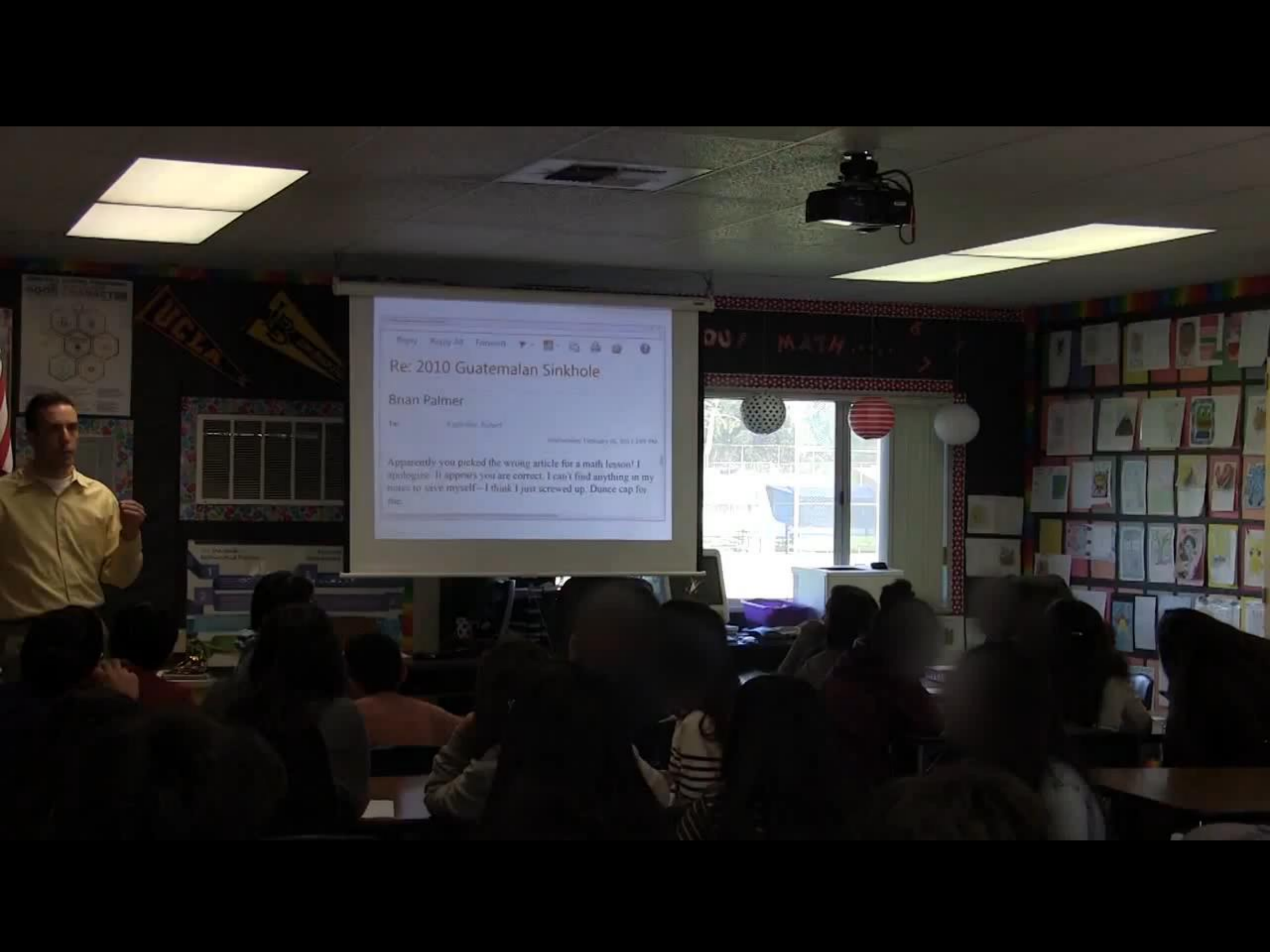
Wednesday, February 06, 2013 2:01 PM

Apparently you picked the wrong article for a math lesson! I apologize. It appears you are correct. I can't find anything in my notes to save myself-- I think I just screwed up. Dunce cap for me.

Sinkhole Dimensions

- National Geographic: "60 feet (18 meters) wide and about 30 stories deep"
- Time Magazine: "runs some 200 ft. deep"
- CNN: "The 20-meter (about 66 feet) diameter sinkhole is about 30 meters (about 100 feet) deep."
- Slate: "A sinkhole, 65 feet across and 100 feet deep"





Reply Reply All Forward

Re: 2010 Guatemalan Sinkhole

Brian Palmer

To: [Kaprielian, Robert](#)


Wednesday, February 10, 2011 1:09 PM

Apparently you picked the wrong article for a math lesson! I apologize. It appears you are correct. I can't find anything in my notes to save myself—I think I just screwed up. Dunc cap for me.

Student Reflections

- “I didn’t say his answer was wrong since he is supposed to know more than an average 8th grader.”
- “Even though Brian was wrong, no one corrected him, because of fear of being wrong and lack of confidence in ourselves.”
- “I didn’t say anything when we were shown the ‘right’ answer because I thought that it must be right because he’s the author, but I knew in my mind he was actually wrong.”
- “I think that I should be the one who argues for my opinion, not just listening to others and accepting that my answer is wrong all the time.”





OLD
(Boring)

NEW
Diamond
Shreddies

Cereal



NEW
(Exciting!)





SQUARE OR DIAMOND?

Vote for your Favourite at DiamondShreddies.com



Diamond

Shreddies
Combo Pack



Square

Diamond

ENLARGED TO SHOW TEXTURE

Made with 100% Whole Grain Wheat

620 g Cereal
SERVING SUGGESTION




Limited Edition

Sensible Solution

- Very High Source of Fibre
- Good Source of 8 Essential Nutrients
- Low in Fat

“Kraft Foods saw an immediate 18% increase in baseline sales of Shreddies within the first month alone, and for months thereafter.”

h





πr^2

The Reality

- Some students felt anxious about not having enough information to take a guess.
- However, guessing helped students determine what they knew and needed to know.
- Students modeled the problem differently:
 - Cylinder
 - Semi-sphere
 - Truncated cone
- Students didn't know what units to use.

STUDENT WORK

What problem are you trying to figure out?	
<p>What is the volume of the sink hole</p> 	
What do you already know from the problem?	What do you need to know to solve the problem?
<ul style="list-style-type: none"> - It needs to be filled with materials such as rocks, cement and dirt. - Circular shape (cylinder) 	<ul style="list-style-type: none"> - How deep is it? - How wide? - How much materials are used to fill the hole?
What is your conclusion?	
<p>First In order to gain a general idea of my ^{question} measurements, I drew an image to represent my given measurements. </p> <p>Then I used the equation formula to find the volume of a cylinder, which was $\pi r^2 h$. I use this equation because I needed to find how much cement was need to fill the hole.</p> <p>My equation look like this $\pi 33^2 \cdot 100$. ^{radius} ^{height} Then I plugged it into my calculator and I got $342,11973$.</p>	

How Do We Assess Student Work?

- Option #1 – Don't assess the problem
- Option #2 – Use general purpose rubric
- Option #3 – Use a problem-specific rubric

Option #2 - General Purpose Rubric

- One point for student reaching the correct conclusion.
- One point for student providing sufficient reasoning to support this conclusion.

What is your conclusion?

In order to solve this problem, you need the width and the height of the hole. Once you have it you plug them into the equation $r^2 \pi \cdot h$ which is to find the volume. Once you find the volume you will know how much ~~concrete~~ cement you will need to order so that you could fill that ~~to~~ hole, which in this case would be 342,119 feet of ~~concrete~~ cement.

What is your conclusion?

This particular sinkhole in Guatemala City, was about 20 meters (66 feet) in diameter and about 30 meters (100 feet) deep. We are trying to find the volume of the hole to figure out how much material is needed to fill it. I used the cylinder volume formula ($V = \pi r^2 h$). When you plug in the radius and the height, you get $V = \pi (33)^2 (100)$. I did not use 66 as my radius, because that is my diameter. Radius is half of the diameter. After you solve, you are left with 342,119.44 ft³. You don't use ft² or ft because the hole is 3 dimensional. From here on, you just use the material cost and amount to find the price of the job.

What is your conclusion?

In order to fill the sinkhole with cement. They will need 342,119 ft³ of cement. How is this possible?

Diameter = 66 feet, but we are looking for radius.

$66/2 = 33$ Now we got our radius which is 33.

$$r = 33$$

Depth = 100 feet.

So we have a radius and height. we can use the volume of a cylinder formula. which is $V = \pi r^2 h$

$$V = \pi (33)^2 \cdot 100$$

$$V = \pi (1089) \cdot 100$$

$$V = 3421.20$$

$$V = 342119.44$$

Option #3 - Problem-Specific Rubric

Requirement	Possible Points	Points Earned
Student finds the correct answer based on the dimensions used.	3	
Student uses the correct units (i.e., cubic feet/meters for volume and feet/meters for length)	1	
Student correctly uses half the diameter for the radius and explains why.	2	
Student creates a narrative using sentences to explain his or her reasoning.	2	

Correct answer	___ / 3	Explains $\frac{d}{2} = r$	___ / 2
Correct units	___ / 1	Narrative w/ sentences	___ / 2

What is your conclusion?

In order to solve this problem, you need the width and the height of the hole. Once you have it you plug them into the equation $r^2 \pi \cdot h$ which is to find the volume. Once you find the volume you will know how much ~~the~~ cement you will need to order so that you could fill that ~~to~~ hole, which in this case would be 342,119 feet of ~~the~~ cement.

Correct answer	___ / 3	Explains $\frac{d}{2} = r$	___ / 2
Correct units	___ / 1	Narrative w/ sentences	___ / 2

What is your conclusion?

This particular sinkhole in Guatemala City, was about 20 meters (66 feet) in diameter and about 30 meters (100 feet) deep. We are trying to find the volume of the hole to figure out how much material is needed to fill it. I used the cylinder volume formula ($V = \pi r^2 h$). When you plug in the radius and the height, you get $V = \pi (33)^2 (100)$. I did not use 66 as my radius, because that is my diameter. Radius is half of the diameter. After you solve, you are left with 342,119.44 ft³. You don't use ft² or ft because the hole is 3 dimensional. From here on, you just use the material cost and amount to find the price of the job.

Correct answer	___ / 3	Explains $\frac{d}{2} = r$	___ / 2
Correct units	___ / 1	Narrative w/ sentences	___ / 2

What is your conclusion?

In order to fill the sinkhole with cement. They will need 342,119 ft³ of cement. How is this possible?

Diameter = 66 feet, but we are looking for radius.

$66/2 = \boxed{33}$ Now we got our radius which is 33.

$r = 33$

Depth = 100 feet.

So we have a radius and height. we can use the volume of a cylinder formula. which is $V = \pi r^2 h$

$$V = \pi(33)^2 \cdot 100$$

$$V = \pi(1089) \cdot 100$$

$$V = 3421.20$$

$$\boxed{V = 342119.44}$$



Complicated
or Complex?



Cookie Monster Cupcakes



Nailed it

method

1. Using an electric mixer, whip the butter until it is pale. This will take at least 5 minutes on high.
2. Gradually add in the icing mixture and vanilla until well combined.
3. With the mixer running, add in food colouring until you get to the Cookie Monster colour. This may be a lot if you are using liquid food colouring or a little if using gel food colouring.
4. Add in the milk and mix until the frosting puffs up.
5. Fill a piping bag with a fluted nozzle and pipe on icing.
6. With the writing icing, place black spots on the marshmallows for pupils.
7. Place on each cupcake.
8. Cut cookies in half and place in 'mouth'.

CUBES

A problem solving strategy

C - Circle the #s

U - underline the ques.

B - box the words

WHAT ISN'T MATHEMATICAL MODELING?

- *It is not modeling in the sense of, “I do; now you do.”*
- *It is not modeling in the sense of using manipulatives to represent mathematical concepts.*
- *It is not modeling in the sense of a “model” being just a graph, equation, or function.*
- *It is not just starting with a real world situation and solving a math problem.*
- *It is not beginning with the mathematics and then moving to the real world.*

Content and Language Objectives using

Content Objective Example:

SWBAT apply the mathematics they know to solve problems arising in everyday life, society, and the workplace. (MP4)

Language Objective Example:

SWBAT understand and use stated assumptions, definitions, and previously established results in constructing arguments. (MP3)

example:

- In early grades, this might be as simple as writing an addition equation to describe a situation. (MP4)
- In middle grades, a student might apply proportional reasoning to plan a school event or analyze a problem in the community. (MP4)
- By high school, a student might use geometry to solve a design problem or use a function to describe how one

Get Updates!

- Receive the latest news, blog posts, and lessons by email.
- To get them:
 - Scan this QR code or
 - Go to tinyurl.com/RKupdates



WHAT DOES IT LOOK LIKE...

- when students have procedural skill but not conceptual understanding or the ability to apply mathematics?
- when students can work with numbers but cannot:
 - critically think
 - applying knowledge and skills to real-world settings
 - analyze and solve complex problems

How far apart are the exits on this freeway: Jct 90 and Jefferson Blvd?





$$1 - \frac{1}{2} - \left(1 - \frac{1}{4}\right)$$

$$1\frac{1}{2} - 1\frac{1}{4}$$


$1\frac{1}{2} - 1\frac{1}{4}$

$1\frac{2}{4} - 1\frac{1}{4}$

$\frac{2}{4} - \frac{1}{4}$

$\frac{1}{4}$

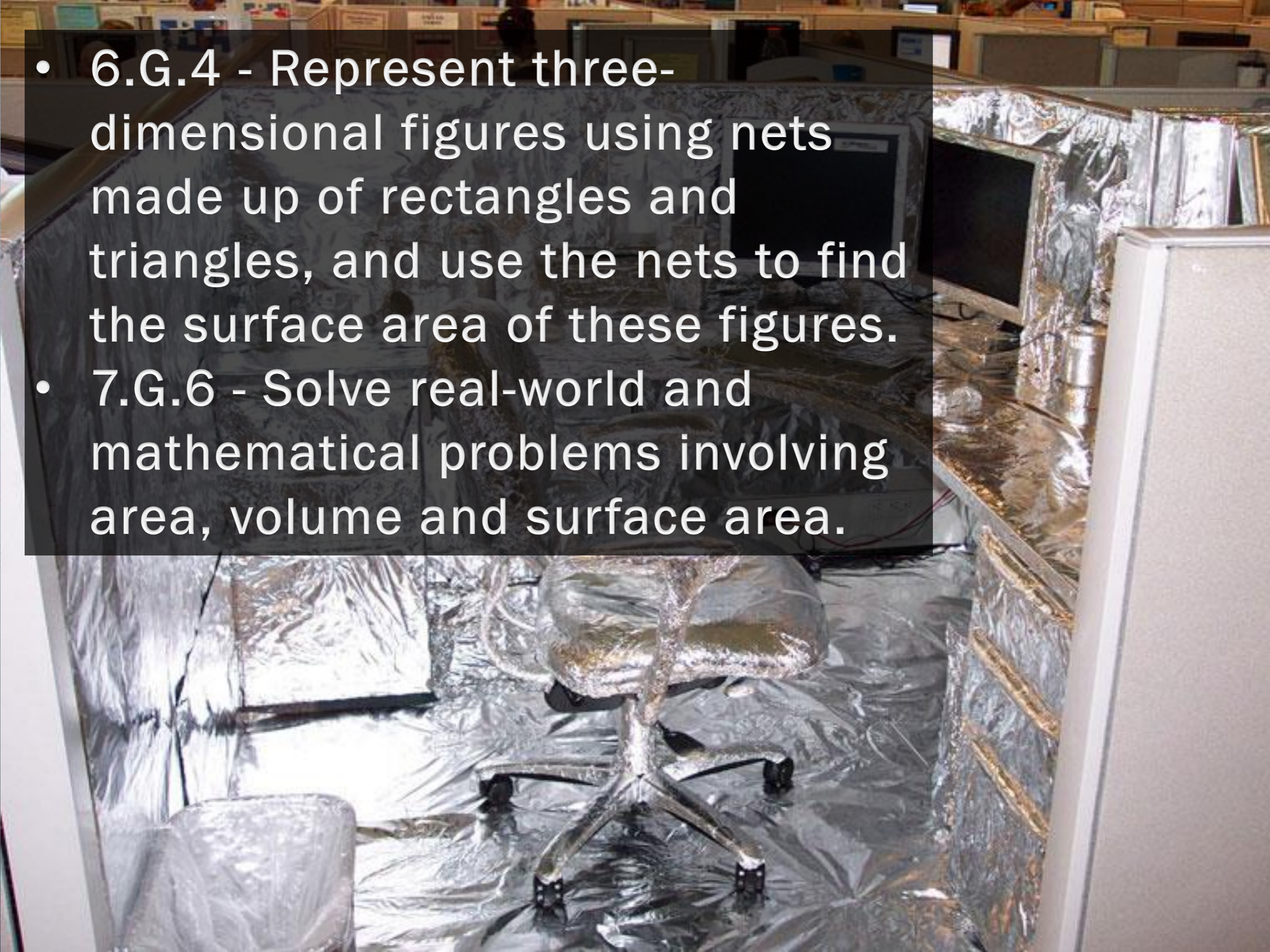




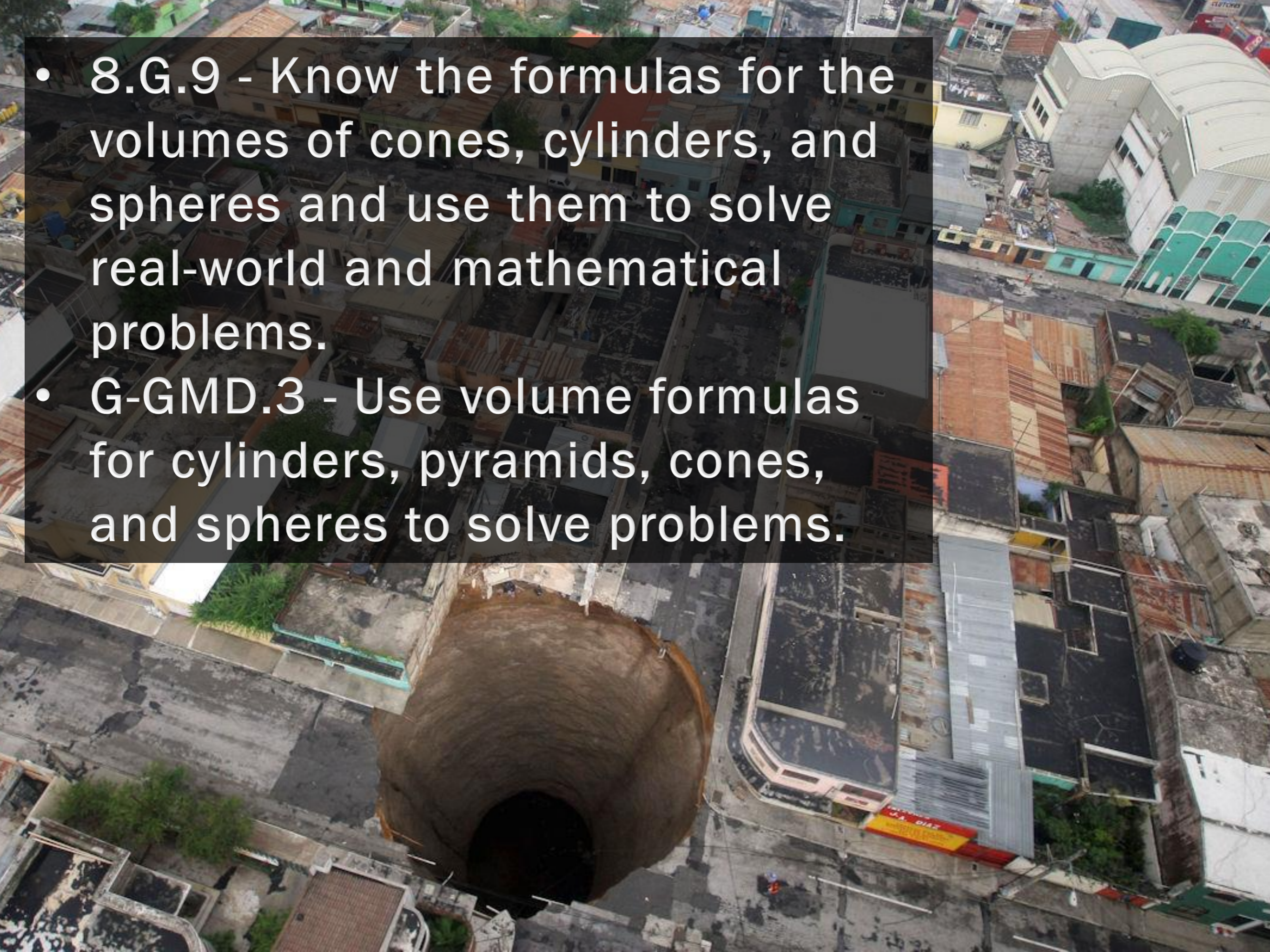
The Four C's

- o Communication
- o Curiosity


- 6.G.4 - Represent three-dimensional figures using nets made up of rectangles and triangles, and use the nets to find the surface area of these figures.
- 7.G.6 - Solve real-world and mathematical problems involving area, volume and surface area.



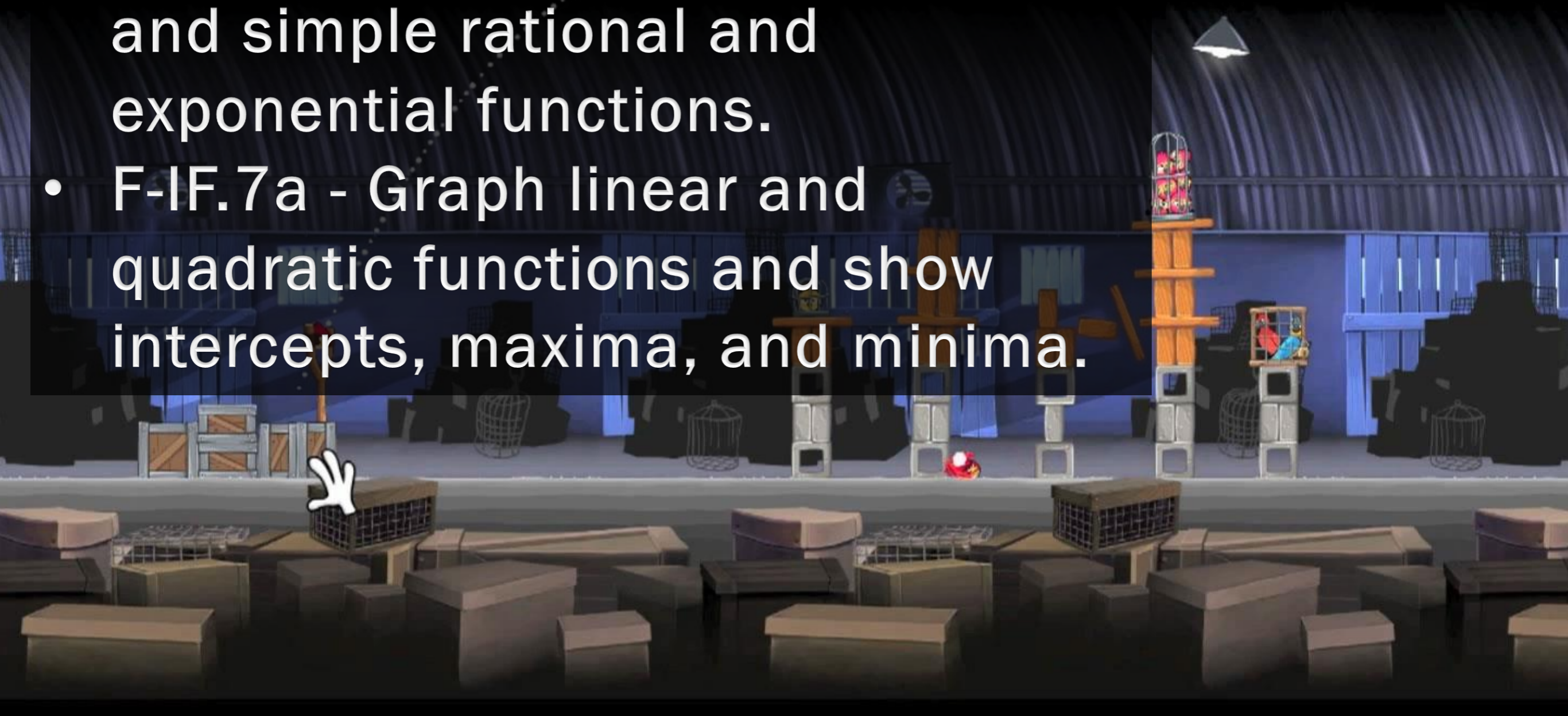
- 8.G.9 - Know the formulas for the volumes of cones, cylinders, and spheres and use them to solve real-world and mathematical problems.
- G-GMD.3 - Use volume formulas for cylinders, pyramids, cones, and spheres to solve problems.



- 8.G.3 Describe the effect of dilations, translations, rotations, and reflections on two-dimensional figures using coordinates.
- G-CO.6 Use geometric descriptions of rigid motions to transform figures and to predict the effect of a given rigid motion on a given figure.



- A-CED.1 - Create equations and inequalities in one variable and use them to solve problems. Include equations arising from linear and quadratic functions, and simple rational and exponential functions.
- F-IF.7a - Graph linear and quadratic functions and show intercepts, maxima, and minima.



- 6.RP.2 - Understand the concept of a unit rate



The Four C's

- o Communication
- o Curiosity
- o Critical Thinking

Problem Solving Framework

- ▶ Inspired by Geoff Krall's resources at emergentmath.com

What problem are you trying to figure out?	What guesses do you have?
What do you already know from the problem?	What do you need to know to solve the problem?
What is your conclusion? How did you reach that conclusion?	

The Four C's

- o Communication
- o Curiosity
- o Critical Thinking
- o Content Knowledge

Goals

- Engaging problem solving
 - Real world problem-based learning
 - Higher depth of knowledge problems
- Better implementation
 - Improve our ability to ask questions
 - Practice preparing to implement a lesson
 - Figure out how to deal with uncomfortable situations

Questioning Scenarios

- The activity begins with teachers in groups of three taking the roles of teacher, student, or observer.
- The individuals playing the role of teacher and student each receive a slip of paper describing their scenario.
- The individual playing the role of observer waits to record all of the teacher's questions to the student.
- Once the activity begins, the teacher will talk to the student in the context of the scenario they read about on the slips of paper.

What did you get for the area of the circle with a radius of 2 units?

4 pi

Great. Do you have any questions?

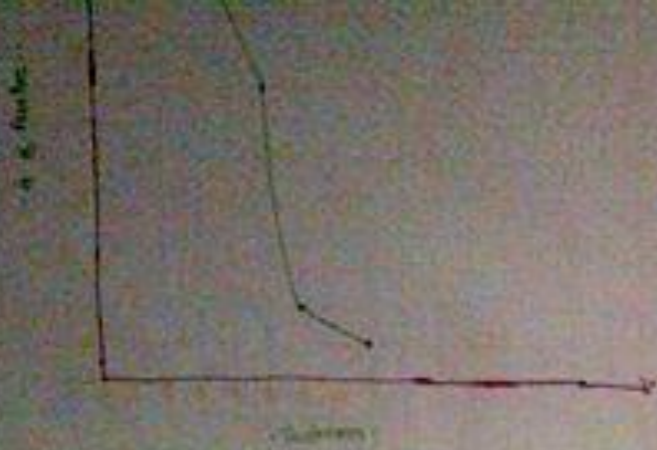
No

What did you get for the area of the circle with a radius of 2 units?

4 pi

Great. How did you get your answer?


The radius is 2 so I plugged it into $2\pi r$ and got 4 pi.



Table

length	4	6	8	9	11
# of bases	12	16	12	16	17

Graph



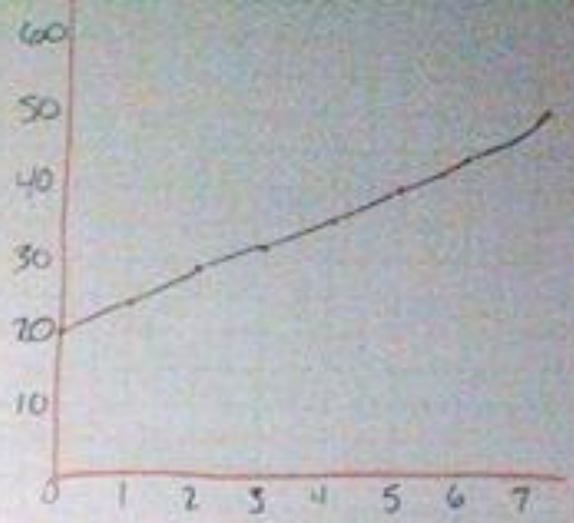
Concave Up
Jada Dixon
Diphenia Goh

WHY?

1	24
2	28
3	32
4	36
5	40

How do you know?

$$y = 20 + 4x$$

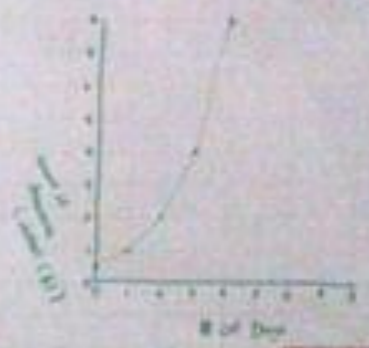


Johnnie King

Convince me.

Exponential

Explain that please.



$B = \frac{1}{2}(2)^x$

Day	0	1	2	3	4
Amount	1	2	4	8	16

Draw a picture.

By: Ashli, Anel

Goals

- Engaging problem solving
 - Real world problem-based learning
 - Higher depth of knowledge problems
- Better implementation
 - Improve our ability to ask questions
 - Practice preparing to implement a lesson
 - Figure out how to deal with uncomfortable situations



COMMON CORE

STATE STANDARDS INITIATIVE

CCSS.MATH.CONTENT.4.MD.A.3

Apply the area and perimeter formulas for rectangles in real world and mathematical problems.

meet the
equal intensity, the
of each grade: conceptual
skills and fluency, and application.

What is the perimeter
of a rectangle that
measures 8 units by 4
units?

Components of Rigor

Procedural Skill and Fluency

Conceptual Understanding

List the dimensions of
a rectangle with a
perimeter of 24 units.



Components of Rigor

Procedural Skill and Fluency

Conceptual Understanding

WHY?



Components of Rigor

Procedural Skill and Fluency

Conceptual Understanding

List the
of a rectangle with a
perimeter of 24
units.



Components of Rigor

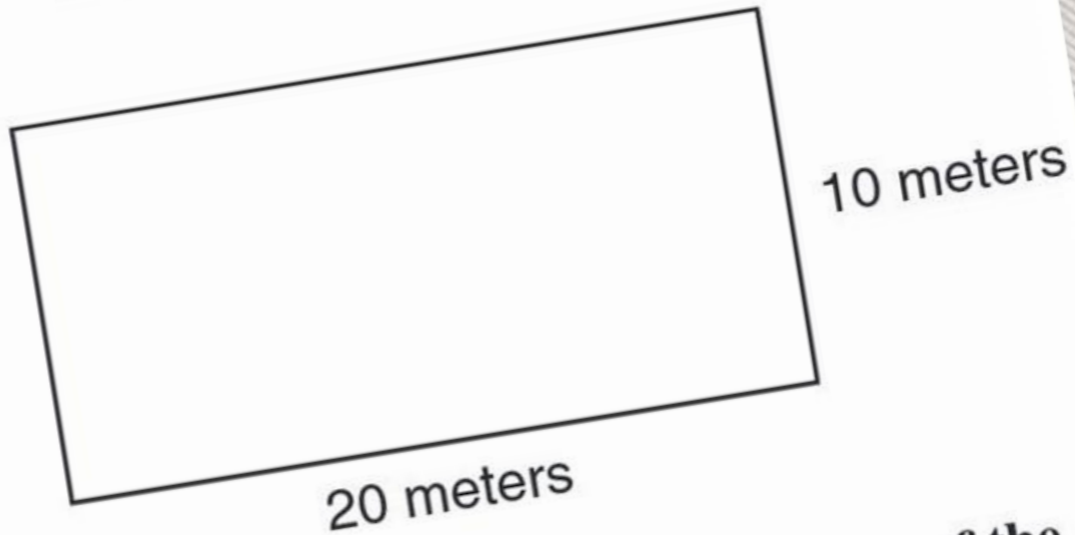
Procedural Skill and Fluency

Conceptual Understanding



71

A basketball court is shaped like a rectangle 20 meters long and 10 meters wide.



What is the perimeter in meters of the court?

- A 30 meters
- B 50 meters
- C 60 meters
- D 200 meters


What is the perimeter
of a rectangle ~~with~~
that measures 8 units
by 4 units?



Components of Rigor

Procedural Skill and Fluency

Conceptual Understanding



Components of Rigor

Procedural Skill and Fluency

Conceptual Understanding

Of all the rectangles with a perimeter of 24 units, which one has the most area?

Of all the rectangles
with a perimeter of
24 units, which one
has the most area?

00:00:00:00

Components of Rigor

Procedural Skill and Fluency



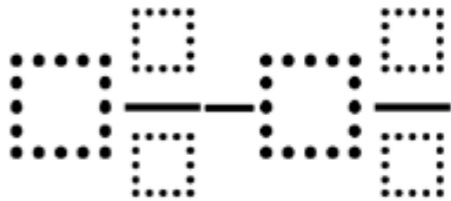
Conceptual Understanding

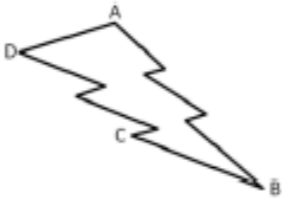
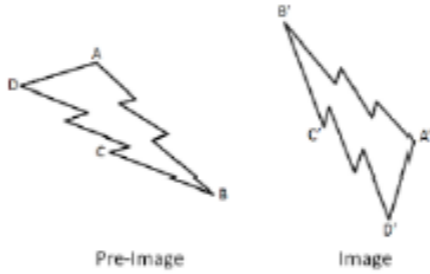
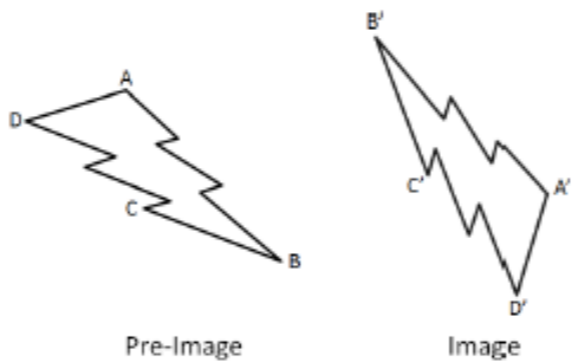
Defining the Problem

- ▶ Students appear to demonstrate “deep, authentic command of mathematical concepts” when given commonly used problems.
- ▶ However with more challenging problems, the same students seem to no longer demonstrate that command.

Addressing the Problem

- ▶ First, we must have a clear understanding about why these problems are different from one another.
- ▶ Next, we need to practice using these problems so that we understand how students may react to them.
- ▶ Last, we need a source that can provide us with a variety of free problems.

Topic	Adding Whole Numbers	Money	Fractions on a Number Line	Area and Perimeter	Subtracting Mixed Numbers
CCSS Standard(s)	<ul style="list-style-type: none"> 1.NBT.4 2.NBT.5 	<ul style="list-style-type: none"> 2.MD.8 	<ul style="list-style-type: none"> 3.NF.2 	<ul style="list-style-type: none"> 3.MD.8 4.MD.3 	<ul style="list-style-type: none"> 5.NF.1
DOK 1 Example	<p>Find the sum.</p> $44 + 27 =$	<p>If you have 2 dimes and 3 pennies, how many cents do you have</p>	<p>Which point is located at $\frac{7}{12}$ below?</p> 	<p>Find the perimeter of a rectangle that measures 4 units by 8 units.</p>	<p>Find the difference.</p> $5\frac{1}{2} - 4\frac{2}{3} =$
DOK 2 Example	<p>Fill in the boxes below using the whole numbers 1 through 9, no more than one time each, so that you make a true equation.</p> $\square\square + 53 = \square\square$	<p>Make 47¢ in three different ways with either quarters, dimes, nickels, or pennies.</p>	<p>Label the point where $\frac{3}{4}$ belongs on the number line below. Be as precise as possible.</p> 	<p>List the measurements of three different rectangles that each has a perimeter of 20 units.</p>	<p>Create three different mixed numbers that will make the equation true by using the whole numbers 1 through 9, no more than one time each. You may reuse the same whole numbers for each of the three mixed numbers.</p> $5\frac{4}{5} - \square\square\square = 3\frac{1}{20}$
DOK 3 Example	<p>Make the largest sum by filling in the boxes below using the whole numbers 1 through 9, no more than one time each.</p> $\square\square + \square\square =$	<p>Make 47¢ using exactly 6 coins with either quarters, dimes, nickels, or pennies.</p>	<p>Create 5 fractions using the whole numbers 0 through 9, exactly one time each as numerators and denominators, and place them all on a number line.</p>	<p>What is the greatest area you can make with a rectangle that has a perimeter of 24 units?</p>	<p>Make the smallest difference by filling in the boxes below using the whole numbers 1 through 9, no more than one time each.</p> 

Topic	Surface Area and Volume	Probability	Transformations	Factoring Quadratics	Quadratics in Vertex Form
CCSS Standard(s)	<ul style="list-style-type: none"> 6.G.4 7.G.6 	<ul style="list-style-type: none"> 7.SP.5 7.SP.7 	<ul style="list-style-type: none"> 8.G.1 G-CO.5 	<ul style="list-style-type: none"> A-SSE.3a 	<ul style="list-style-type: none"> F-IF.7a
DOK 1 Example	Find the surface area of a rectangular prism that measures 3 units by 4 units by 5 units.	What is the probability of rolling a sum of 5 using two 6-sided dice?	Rotate the image below 90° counterclockwise about point D and reflect it across a horizontal line. 	Find the factors: $2x^2 + 7x + 3$	Find the roots and maximum of the quadratic equation below. $y = -3(x - 4)^2 - 3$
DOK 2 Example	List the measurements of three different rectangular prisms that each have a surface area of 20 square units.	What value(s) have a 1/12 probability of being rolled as the sum of two 6-sided dice?	List three sequences of transformations that take pre-image ABCD to image A'B'C'D'. 	Fill in the blank with integers so that the quadratic expression is factorable. $x^2 + __x + 4$	Create three equations for quadratics in vertex form that have roots at 3 and 5 but have different maximum and/or minimum values.
DOK 3 Example	What is the greatest volume you can make with a rectangular prism that has a surface area of 20 square units?	Fill in the blanks to complete this sentence using the whole numbers 1 through 9, no more than one time each. Rolling a sum of $__$ on two $__$ -sided dice is the same probability as rolling a sum of $__$ on two $__$ -sided dice.	What is the fewest number of transformations needed to take pre-image ABCD to image A'B'C'D'? 	Fill the blank by finding the largest and smallest integers that will make the quadratic expression factorable. $2x^2 + 3x + __$	Create a quadratic equation with the largest maximum value using the whole numbers 1 through 9, no more than one time each. $y = -\square(x - \square)^2 + \square$



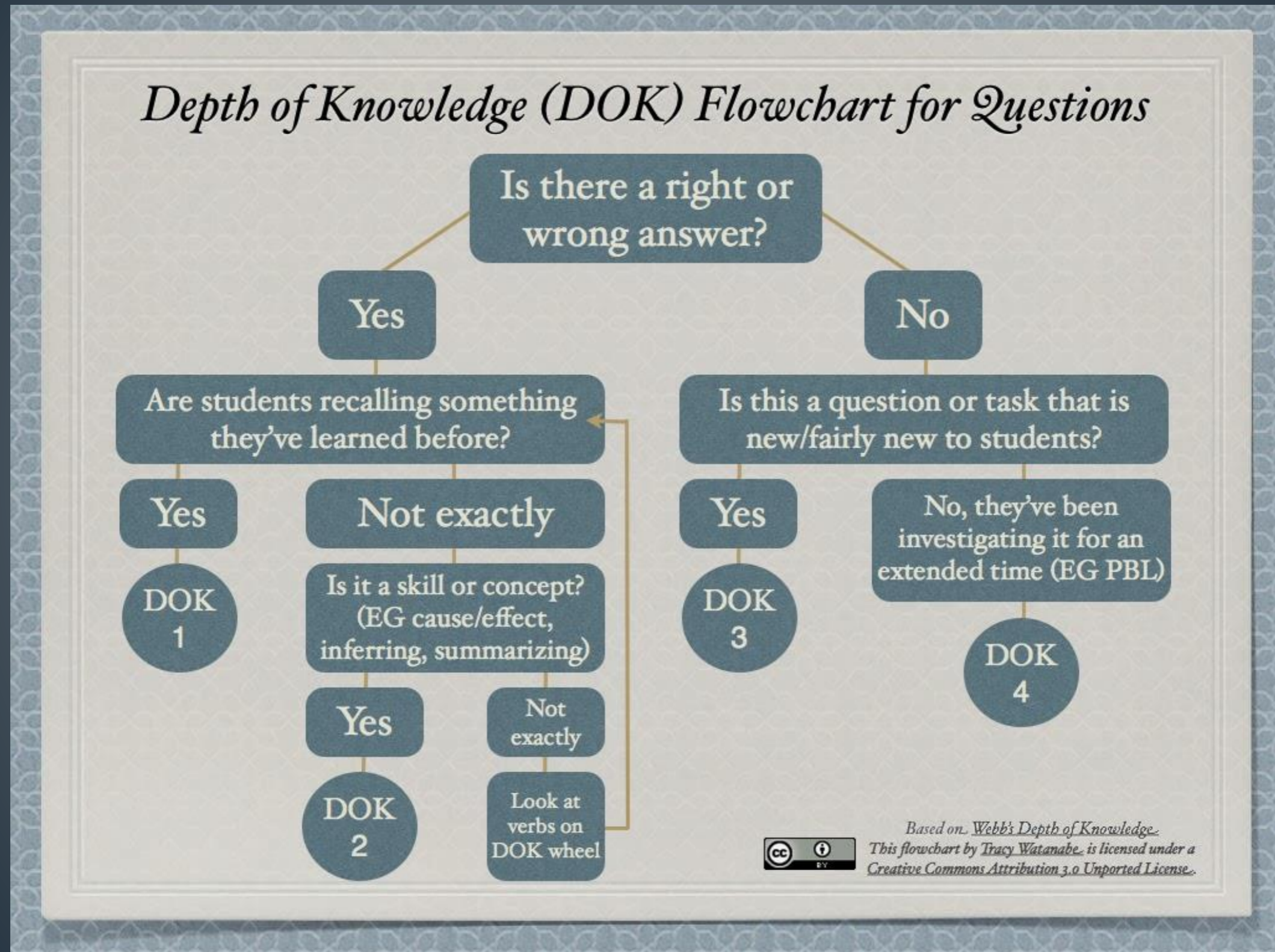
Complicated
or Complex?

DOK Verb Wheel



Source: Unknown

DOK Flowchart for Questions



DOK Posters

DOK 1

Routine Thinking

- Can you recall ___?
- Can you identify ___?
- How would you describe ___?
- What might you include on a list about ___?
- Can you select ___?
- How can you find the meaning of ___?

arrange calculate memorize
measure name recognize
recall repeat identify
illustrate match label
state list state

DOK 2

Conceptual Thinking

- Can you explain how ___ affected ___?
- How would you apply what you learned to develop ___?
- How would you summarize ___?
- What do you notice about ___?
- How would you estimate ___?
- How could you organize ___?

compare classify categorize
measure graph distinguish
predict modify construct
organize infer summarize
interpret make observations

DOK 3

Strategic Reasoning

- How is ___ related to ___?
- What conclusions can be drawn?
- Can you elaborate on ___?
- How would you test ___?
- What evidence supports ___?
- What would happen if ___?
- Why is that the best answer?

assess compare construct
apprise revise hypothesize
critique investigate
draw conclusions
develop a logical argument

DOK 4

Extended Reasoning

- Write a research paper.
- What information can you gather to support your idea about ___?
- Write a thesis, drawing conclusions from multiple sources.
- Apply information from one text to another to develop an persuasive argument.

design connect prove
analyze critique synthesize
create apply concepts

DOK Level Differences



▶ **Level 1: Recall & Reproduction**

- ▶ Often a trivial application of facts.
- ▶ Generally requires little to no cognitive effort beyond remembering the right formula.
- ▶ Usually only one answer.

▶ **Level 2: Skills & Concepts**

- ▶ Usually requires more than one step to solve.
- ▶ Often multiple answers.

▶ **Level 3: Strategic Thinking**

- ▶ Usually requires critical thinking about the best way to approach a problem.
- ▶ May be multiple answers or a single optimal answer.
- ▶ Often challenging enough to make your head hurt.

▶ **Level 4: Extended Thinking**

- ▶ In mathematics these are generally represented by performance tasks or problem-based lessons.


Adding Decimals

Use the numbers 1 through 9, exactly one time each, to fill in the boxes and make three decimals whose sum is as close to 1 as possible.

$$\begin{array}{r} 0.\square\square\square \\ 0.\square\square\square \\ + 0.\square\square\square \\ \hline \end{array}$$

First attempt:

Points: ___/2 attempt ___/2 explanation




area:
48

What did you learn from this attempt? How will your strategy change on your next attempt?

~~This attempt doesn't equal 24.~~

Second attempt:

Points: ___/2 attempt ___/2 explanation



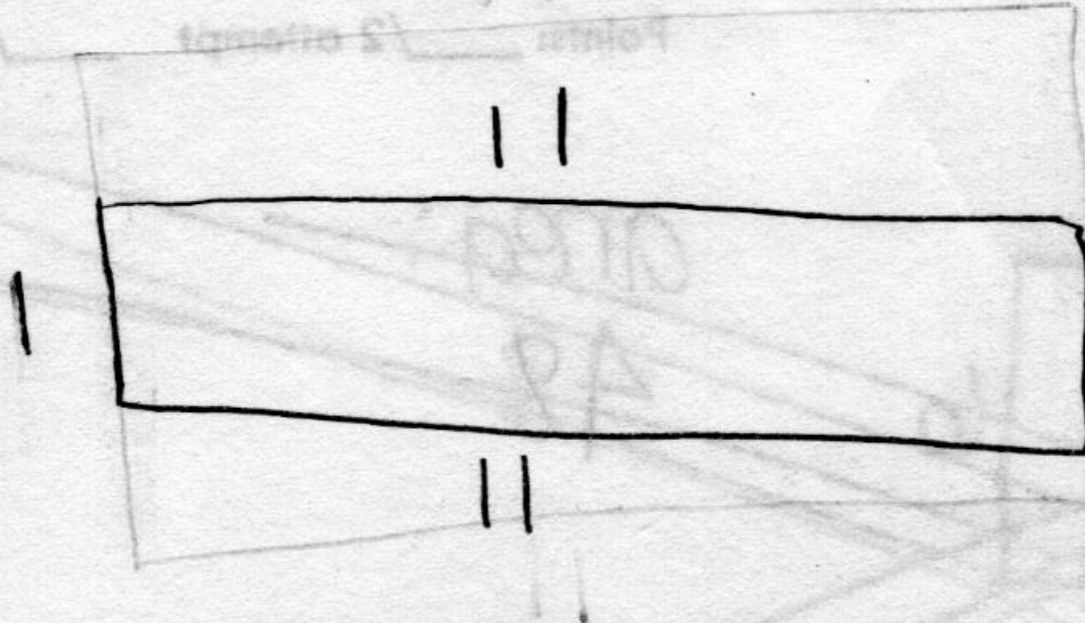
area:
32

What did you learn from this attempt? How will your strategy change on your next attempt?

The perimeter was 24, and the area was 32
but I think there's a blader #

Fourth attempt:

Points: ___/2 attempt ___/2 explanation

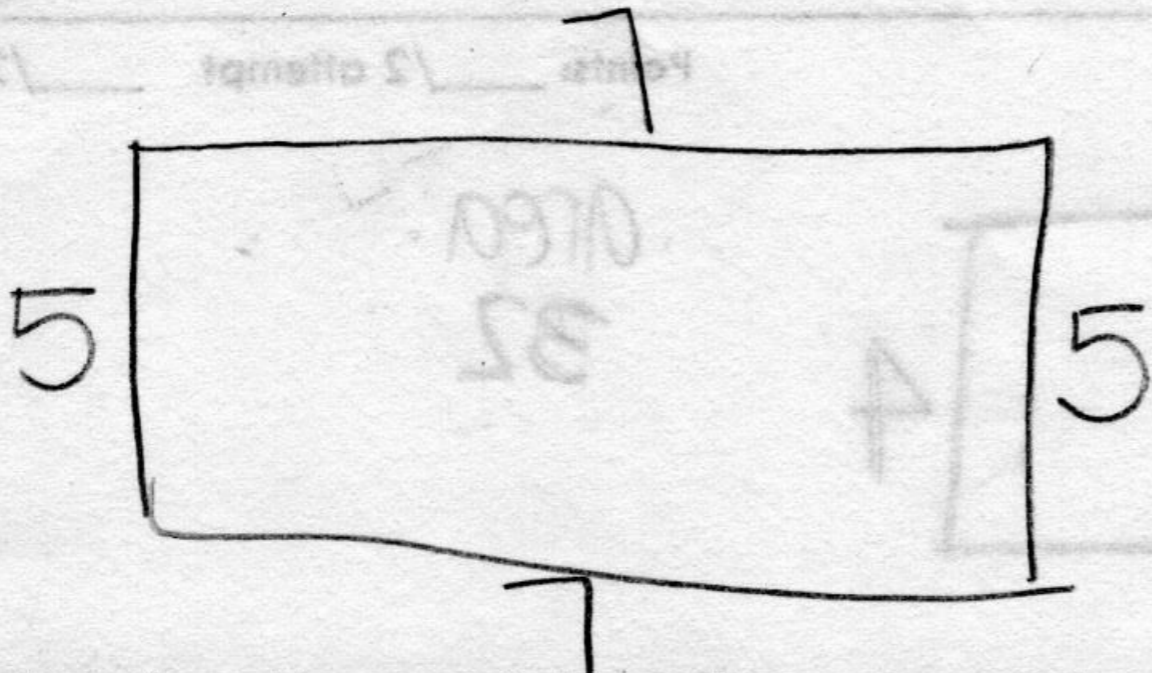


What did you learn from this attempt? How will your strategy change on your next attempt?

The perimeter is 24, but the area is 11 and attempt #2 the area is 32
Strategy: Use #'s with more than one row.

Fifth attempt:

Points: ___/2 attempt ___/2 explanation



area:
35

What did you learn from this attempt? How will your strategy change on your next attempt?

DOK

FAQ

- *When will students ever use this?*
- *What DOK level should I start students off with?*
- *How do teachers fit these problems into their pacing?*
- *How do I help prevent students from giving up after trying the problem once or twice?*
- *Where can I find other DOK 2 and DOK 3 problems or submit ones I've made?*



Goals

- Engaging problem solving
 - Real world problem-based learning
 - Higher depth of knowledge problems
- Better implementation
 - Improve our ability to ask questions
 - Practice preparing to implement a lesson
 - Figure out how to deal with uncomfortable situations

Open Middle

Challenging math problems worth solving

- Home
- Kinder ▾
- Grade 1 ▾
- Grade 2 ▾
- Grade 3 ▾
- Grade 4 ▾
- Grade 5 ▾
- Grade 6 ▾
- Grade 7 ▾
- Grade 8 ▾
- High School ▾
- About
- Submit



THE TOP 10 MOST POPULAR PROBLEMS OF 2015

1. Two-Step Equations by Robert Kaplinsky, Daniel Luevanos, and Robert Kaplinsky
2. Rational and Irrational Equations by Bryan Anderson
3. Order of Operations by Robert Kaplinsky with answer from Michael Fenton and his students
4. Interpreting Percentages by Robert Kaplinsky
5. Adding Two-Digit Numbers Given One by Robert Kaplinsky
6. One Solution, No Solutions, Infinite Solutions by Bryan Anderson
7. Multiplying a Two-Digit Number by a Single-Digit Number by Robert Kaplinsky
8. Dot Card Counting by Dan Meyer
9. Exponents and Order of Operations by Zack Miller
10. Converting Between Fractions and Decimals by Robert Kaplinsky



OPEN MIDDLE WORKSHEET

Download the Open Middle Worksheet (Regular):
Version 1.2

Download the Open Middle Worksheet (Large):
Version 1.1

SUBSCRIBE

Receive emails every time a new problem is published.

Subscribe

WHAT ARE PEOPLE SAYING ABOUT OPEN MIDDLE?



Brian Marks
@Yummymath

Follow

Have you checked out openmiddle.com @openmiddle Should be on your short list of math ed resources #MTBoS #mathchat #maths #elemchat


6:55 PM - 26 Feb 2015

BROWSE BY COMMON CORE STATE STANDARDS

- .Kindergarten (6)
 - Counting & Cardinality (2)
 - Number & Operations in Base Ten (1)
 - Operations & Algebraic Thinking (3)
- Grade 1 (12)

Google™ Custom Search ×

EQUIDISTANT POINTS



Directions: How many points with integer coordinates are 5 units away from $(-2, 3)$?

Hint

Which methods are available to determine the answer to this problem? What shape is defined by *all* of the points that are 5 units away $(-2, 3)$?

Answer

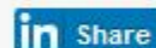
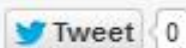
12 points: $(-5, 7)$, $(-7, 3)$, $(-5, -1)$, $(-2, -2)$, $(3, 3)$, $(1, -1)$, $(-2, 8)$, $(1, 7)$, $(2, 6)$, $(-6, -6)$, $(-6, 0)$, and $(2, 0)$

Source: [Dylan Kane](#)



Print

SHARE !



Tagged with: [8.G.8](#) [DOK 2: SKILL / CONCEPT](#) [DYLAN KANE](#) [G-GPE.1](#)

Previous: [Cone and Cylinder Volumes](#)

Next: [Pythagorean Shell](#)

LEAVE A REPLY

OPEN MIDDLE WORKSHEET

Download the Open Middle Worksheet:
Version 1.1

SUBSCRIBE

Receive emails every time a new problem is published.

COMMON CORE STATE STANDARDS

- Grade 1 (6)
 - Number & Operations in Base Ten (3)
 - Operations & Algebraic Thinking (3)
- Grade 2 (6)
 - Measurement & Data (2)
 - Number & Operations in Base Ten (4)
- Grade 3 (11)
 - Measurement & Data (6)
 - Number & Operations in Base Ten (3)
 - Number & Operations—Fractions (2)

Problem-Based Lesson Resources

- Problem-based lesson search engine: <http://robertkaplinsky.com/prbl-search-engine/>
- My lessons: <http://www.robertkaplinsky.com/lessons>
- Dan Meyer: <http://threeacts.mrmeyer.com>
- Andrew Stadel: <http://www.estimation180.com/lessons.html>
- Graham Fletcher: <http://gfletchy.com/3-act-lessons/>
- Geoff Krall: <http://tinyurl.com/PrBLmaps>
- Dan Meyer's TED talk: <http://tinyurl.com/meyer-TED>



Home



Search

Facebook

Be the first of your friends to like this

How I Can Help You



[Real World Problems](#)

My workshops help teachers implement [problem-based lessons](#) by helping them experience them from both student and teacher perspective, leading to



[Depth of Knowledge](#)

Problems at higher depth of knowledge levels have the potential to challenge the most gifted students yet remain accessible to struggling students. I can help teachers

What People Are Saying

Robert was a dynamic trainer who presented information in an unassuming, learner-centered way, allowing teacher participants to think about their own teaching and apply the new strategies accordingly. Throughout the two days, Robert modeled sound instructional strategies as he explained the why, the what, and the how of implementing this approach to math instruction. He

Subscribe for Updates

Enter your information below so you don't miss out on news, blog posts, and lessons! If you live in the United States, enter your zip code and I'll use it to let you know about events near you.



Lessons

- [View all](#)
- [Kinder](#)
- [1st](#)
- [2nd](#)
- [3rd](#)
- [4th](#)
- [5th](#)
- [6th](#)
- [7th](#)
- [8th](#)
- [Alg 1](#)
- [Geo](#)
- [Alg 2](#)



[How Many Chip Bags Will There Be?](#)



[How Can We Make Stronger Passwords?](#)

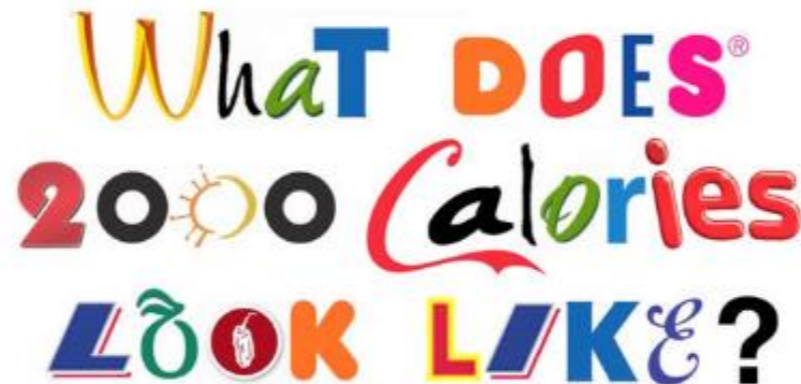
Search

Facebook

Be the first of your friends to like this



[How Many Hot Dogs And Buns Should He Buy?](#)



[What Does 2000 Calories Look Like?](#)

Subscribe for Updates

Enter your information below so you don't miss out on news, blog posts, and lessons! If you live in the United States, enter your zip code and I'll use it to let you know about events near you.

Robert Kaplinsky's Problem-Based Lessons



File Edit View Insert Format Data Tools Add-ons Help

View only

	A	B	C	D	
1	Lesson	Concept / Skill	Standard 1	Standard 2	Standard 3
2	How Many Chip Bags Will There Be?	Ratio and Proportions, Population Sampling	6.RP.3	6.RP.3c	7.RP.3
3	How Can We Make Stronger Passwords?	Permutations, Combinations, Probability, Exponents, Exponential Growth	7.SP.8	8.EE.1	S-MD.1
4	How Many Hot Dogs And Buns Should He Buy?	Least Common Multiple (LCM)	6.NS.4		
5	What Does 2000 Calories Look Like?	Unit Rates, Ratios, Solving Equations, and Solving Inequalities	6.EE.3	6.EE.4	6.EE.5
6	How Much Money Are The Coins Worth?	Decimal Operations and Coin Counting	2.MD.8	5.NBT.7	6.NS.3
7	How Many Times Will A Case of Paper Jam?	Interpreting Percentages	6.RP.3c	7.RP.3	
8	How Many Soda Combinations Are There On A Coke Freestyle?	Counting, Composing, and Decomposing Numbers	K.CC.5	K.CC.6	K.OA.1
9	What Should The Freeway Sign Show?	Fractions on Number Lines, Converting Units, Decimal and Fraction Operations	3.NF.1	3.NF.2	3.NF.3
10	How Fast Was The Fastest Motorcycle Speeding Ticket Ever?	Converting Units and Unit Rates	5.MD.1	6.RP.3d	7.RP.3
11	How Much Did Patrick Peterson Lose By Not Cashing His Check?	Compound and/or Simple Interest	7.RP.3	N-RN.2	A-SS.1
12	How Many Biscuits Can You Make?	Dividing Fractions and Mixed Numbers	5.NF.7	5.NF.7a	5.NF.7b
13	How Much Bigger Should They Make Zoolander's School?	Scale and Proportions	5.NF.5A	7.RP.2	7.G.1
14	Where Is The Freeway Sign Located?	Identifying Fractions on a Number Line	3.NF.1	3.NF.2	3.NF.3
15	How Far Apart Are Exits On A Ring Road?	Arc length measures	G-C.5		
16	How Much Is One Third Of A Cup Of Butter?	Identifying Fractions on a Number Line	3.NF.1	3.NF.2	3.NF.3
17	How Do Skytypers Write Messages?	Transformations (Rotations, Reflections, Dilations, and Translations)	8.G.1	8.G.2	8.G.3
18	How Big Is The Bermuda Triangle?	Coordinate Geometry: Area of Triangle	G-GPE.7		
19	What Fraction Of Children Are In The Right Car Seat?	Representing and Comparing Fractions	3.NF.1	3.NF.2	3.NF.3
20	How Much Did The Temperature Drop?	Absolute Value	6.NS.7c	7.NS.1c	
21	How Much Shorter Are Staggered Pipe Stacks?	Circles, Pythagorean Theorem, trigonometric ratios, and linear functions	8.G.7	A-CED.1	A-CE.1
22	How Do You Write A Check To Pay For Something?	Expanded Form	2.NBT.3	4.NBT.2	5.NB.1
23	How Can We Correct The Scarecrow?	Pythagorean Theorem	8.G.6	G-SRT.4	
24	How Much Does A 100x100 In-N-Out Cheeseburger Cost?	Building and Interpreting Linear Functions	8.F.1	8.F.3	8.F.4
25	How Can We Water All Of The Grass?	Circles, Pythagorean Theorem, trigonometric ratios	7.G.4	8.G.7	G-SP.1
26	How Much Money IS That?!	Volume of rectangular prism	5.MD.3	5.MD.4	5.MD.5
27	How Much Money Should Dr. Evil Demand?	Exponential Growth	N-RN.2	A-SSE.1	A-SS.1
28	How Tall Is Mini-Me?	Scale and Dividing Decimals	5.NF.5	5.NF.5a	5.NF.5b
29	How Did They Make Ms. Pac-Man?	Transformations (Rotations, Reflections, and Translations)	8.G.1	8.G.2	8.G.3
30	Which Ticket Option Is The Best Deal?	Unit Rates and Ratios	6.RP.2	6.RP.3	6.RP.3
31	How Far Apart Are The Freeway Exits?	Fractions on a Number Line and Subtracting Fractions	3.NF.2	3.NF.2b	4.NF.1
32	Do We Have Enough Paint?	Area	3.MD.5	3.MD.6	3.MD.7
33	How Many Stars Are There In The Universe?	Scientific Notation	8.EE.3	8.EE.4	
34	What Rides Can You Go On?	Inequalities and Measurement	2.MD.1	6.NS.7a	6.NS.7b
35	Do You Have Enough Money?	Money	2.MD.8		
36	Which Bed Bath & Beyond Coupon Should You Use?	Percent Discount	7.RP.3		
37	Is Gas Cheaper With Cash Or Credit Card?	Percent Discount	7.RP.3		
38	Where's The Nearest Toys R Us?	Pythagorean Theorem (Distance in coordinate system)	8.G.8	G-SRT.8	G-GE.1

Contact

Robert Kaplinsky



robert@robertkaplinsky.com



robertkaplinsky.com/gw



[@robertkaplinsky](https://twitter.com/robertkaplinsky)



Grassroots Workshops

ROBERT KAPLINSKY




@robertkaplinsky



Goals

- Engaging problem solving
 - Real world problem-based learning
 - Higher depth of knowledge problems
- Better implementation
 - Improve our ability to ask questions
 - Practice preparing to implement a lesson
 - Figure out how to deal with uncomfortable situations





Source: Andrew Stadel via www.estsimation180.com



**Height:
72 inches**



**Height:
72 inches**



**Width:
36 inches**





**Height:
72 inches**



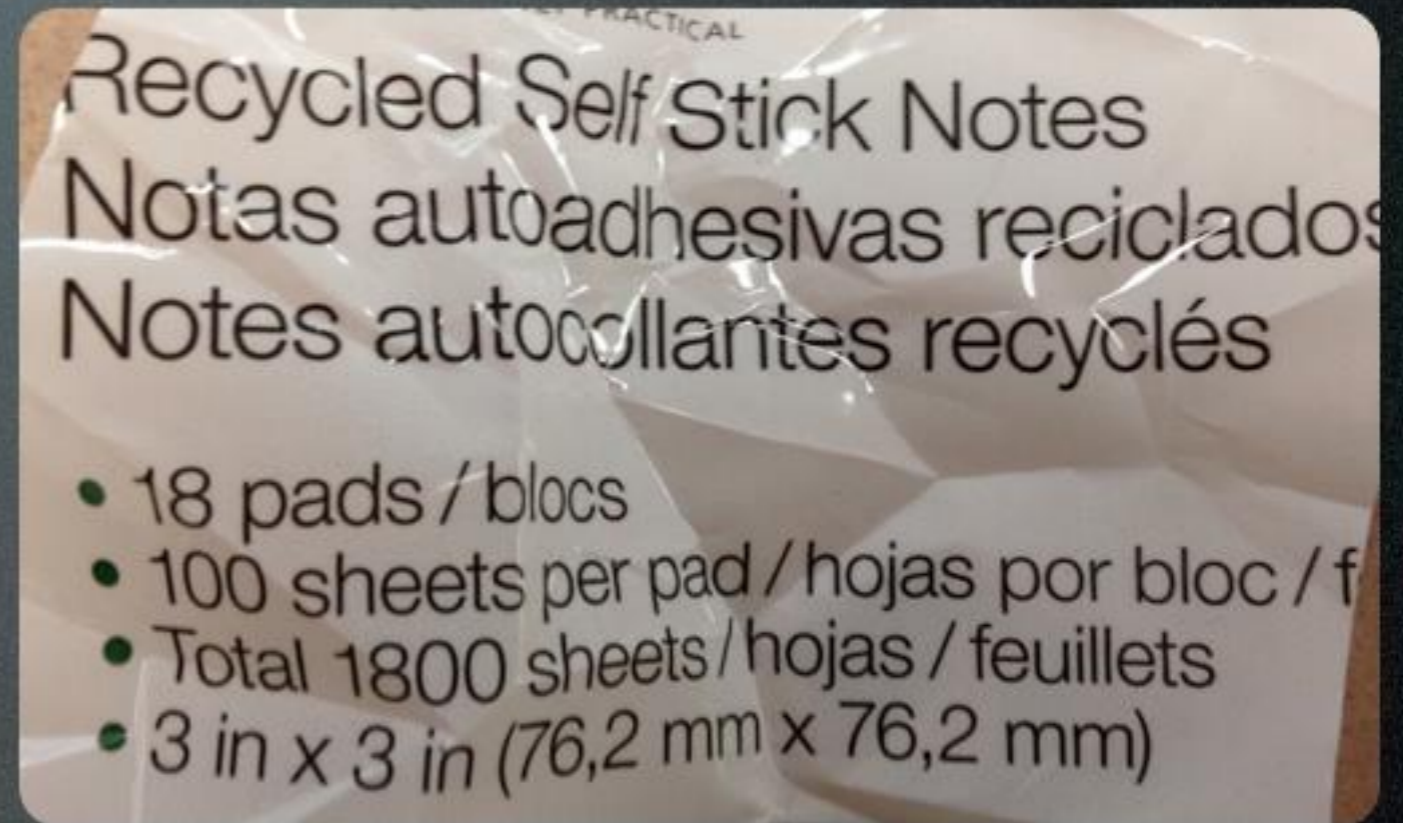
**Width:
36 inches**



**Depth:
18 inches**



Sticky note



Dimensions:

3" x 3"



Source: Andrew Stadel via www.estimated180.com

PERFORMANCE TASK

CEREAL BOXES

A cereal company uses cereal boxes that are rectangular prisms. The boxes have the dimensions shown.

- 12 inches high
- 8 inches wide
- 2 inches deep

The managers of the company want a new size for their cereal boxes. The new boxes have to be rectangular prisms. You will evaluate one box design the company proposed. Then you will create and propose your own design for the company.

Requirements for the new boxes:

- The new boxes have to use less cardboard than the

1

Determine the volume of the current cereal box with the dimensions 12 inches high, 8 inches wide, and 2 inches deep.

Find the volume, V , in cubic inches, of each box.

Volume of Original Box: $V = \underline{\hspace{1cm}} \text{ in}^3$


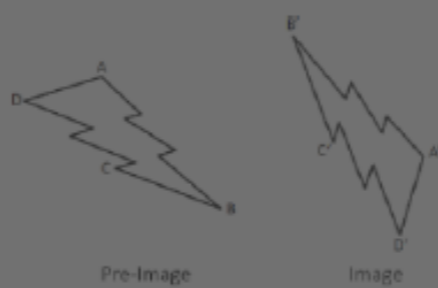
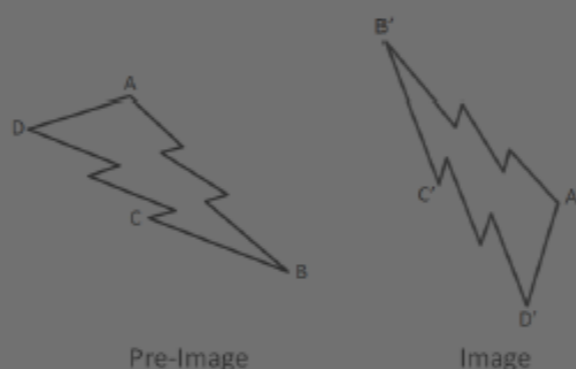


1	2	3
4	5	6
7	8	9
0	.	-

2

Label the dimensions of the net for the current cereal box with dimensions 12 inches high, 8 inches wide, and 2 inches deep.

 Delete

Topic	Surface Area and Volume	Probability	Transformations	Factoring Quadratics	Quadratics in Vertex Form
CCSS Standard(s)	<ul style="list-style-type: none"> 6.G.4 7.G.6 	<ul style="list-style-type: none"> 7.SP.5 7.SP.7 	<ul style="list-style-type: none"> 8.G.1 G-CO.5 	<ul style="list-style-type: none"> A-SSE.3a 	<ul style="list-style-type: none"> F-IF.7a
DOK 1 Example	Find the surface area of a rectangular prism that measures 3 units by 4 units by 5 units.	What is the probability of rolling a sum of 5 using two 6-sided dice?	Rotate the image below 90° counterclockwise and reflect it across a horizontal line. 	Find the factors: $2x^2 + 7x + 3$	Find the roots and maximum of the quadratic equation below. $y = -3(x - 4)^2 - 3$
DOK 2 Example	List the measurements of three different rectangular prisms that each has a surface area of 20 square units.	What value(s) have a 1/12 probability of being rolled as the sum of two 6-sided dice?	List three sequences of transformations that take pre-image ABCD to image A'B'C'D'. 	Fill in the blank with integers so that the quadratic expression is factorable. $x^2 + __x + 4$	Create three equations for quadratics in vertex form that have roots at 3 and 5 but have different maximum and/or minimum values.
DOK 3 Example	What is the greatest volume you can make with a rectangular prism that has a surface area of 20 square units?	Fill in the blanks to complete this sentence using the whole numbers 1 through 9, no more than one time each. Rolling a sum of $__$ on two $__$ -sided dice is the same probability as rolling a sum of $__$ on two $__$ -sided dice.	What is the fewest number of transformations needed to take pre-image ABCD to image A'B'C'D'? 	Fill the blank by finding the largest and smallest integers that will make the quadratic expression factorable. $2x^2 + 3x + __$	Create a quadratic equation with the largest maximum value using the whole numbers 1 through 9, no more than one time each. $y = -\square(x - \square)^2 + \square$

Discussion Questions

- How will problem-based lessons like these prepare students for a performance task like the Cereal Box?
- What skills might students still be lacking to be successful with a problem like this?

Why Are You Using That Problem?

- Use the problem to introduce a new concept
 - Best Case:
 - Great context for beginning a unit
 - Worst Case:
 - What was the purpose of this problem?
 - Why didn't you finish it?
 - Why didn't you let students struggle through it?
 - Did the teacher end the problem because he or she was confused and gave up?

Why Are You Using That Problem?

- Productive struggle
 - Best Case:
 - Students worked hard and made connections.
 - Worst Case:
 - Why did the teacher let the students sit there confused instead of telling them what to do?
 - Did the students even learn anything because they never figured out the answer?
 - Why didn't the teacher finish the problem? Did she lose track of time?

Why Are You Using That Problem?

- Problem completion
 - Best Case:
 - Everyone experienced a complete problem.
 - Worst Case:
 - Who really did the work today: the students or the teacher?
 - Why did the teacher not see all those great opportunities for students to make their own connections and take advantage of them?
 - Why did the teacher give such obvious hints and tell them what to do?

***FIVE
PRACTICES***



Discussion Questions

- “Giving students too much or too little support, or too much direction, can result in a decline in the cognitive demands of the task.” (p. 550) Why?
- “By making purposeful choices about the order in which students’ work is shared, teachers can maximize the chances that their mathematical goals for the discussion will be achieved.” (p. 554) What ways do teachers currently select students? How would you suggest they change their selection process after reading this?
- What challenges might teachers have when trying to “connect” student solutions? (p. 554)

Implementing the Five Practices

1. Pick a selection strategy you anticipate using before looking at the student work.
2. Next, review the student work to simulate the reality that you won't know what students will actually do.
3. Figure out which students you would have share their mathematical work.
4. Determine the order you would have those students present their work.
5. Decide on which connections you would emphasize between the students' work and mathematical ideas.

Posters

- At the top of the poster, list the selection strategy used by your group. For example:
 - Starting with the most commonly used strategy and moving to one that few students used.
 - Starting with a strategy that is more concrete and moving to strategies that are more abstract.
 - Incorporating wrong answers to address common misconceptions (“Who made the best mistake?”)
- Attach those students’ work to the poster in the order that you would present it.
- Next to the student work list the questions you would ask the student(s) or ideas that you would want to come out as a result of showing that student’s work.










- Change
- Transition
 - Ending

- Change
- Transition
 - Ending
 - Neutral Zone

- Change
- Transition
 - Ending
 - Neutral Zone
 - New Beginning



What does this
mean for math
education?

- Change
- Transition
 - Ending

- People may not stop doing anything. They may try to do all the old things and the new things. Soon they burn out with the overload.
- People make their own decisions about what to discard and what to keep, and the result is inconsistency and chaos.
- People toss out everything that was done in the past.

- Change
- Transition
 - Ending
 - Neutral Zone

- Change
- Transition
 - Ending
 - Neutral Zone
 - New Beginning

Goals

- Engaging problem solving
 - Real world problem-based learning
 - Higher depth of knowledge problems
- Better implementation
 - Improve our ability to ask questions
 - Practice preparing to implement a lesson
 - Figure out how to deal with uncomfortable situations

Get Updates!

- Receive the latest news, blog posts, and lessons by email.
- To get them:
 - Scan this QR code or
 - Go to tinyurl.com/RKupdates





struggle: none
feedback: none
reward: none



struggle: low
feedback: low
reward: high



struggle: medium
feedback: high
reward: medium



struggle: high
feedback: high
reward: high



Pre-Mortem

- The lesson flopped. What went wrong?
- You have sixty seconds to write down all the reasons the lesson did not go well.
- Create a combined list with your neighbors.
- Then discuss “less helpful” and “more helpful” ways you could address them if they do happen.



Setting Up The Problem

- What do you do when students ask for data/information you don't have, hadn't considered, or forgot to get?
- What do you do when students ask for information that is probably not important or that they don't actually need?

TICKET BOOTHS

1 TICKET = \$.50


12 TICKETS = \$5.00

25 TICKETS = \$10.00

50 TICKETS = \$25.00

120 TICKETS = \$50.00

HAVE FUN!



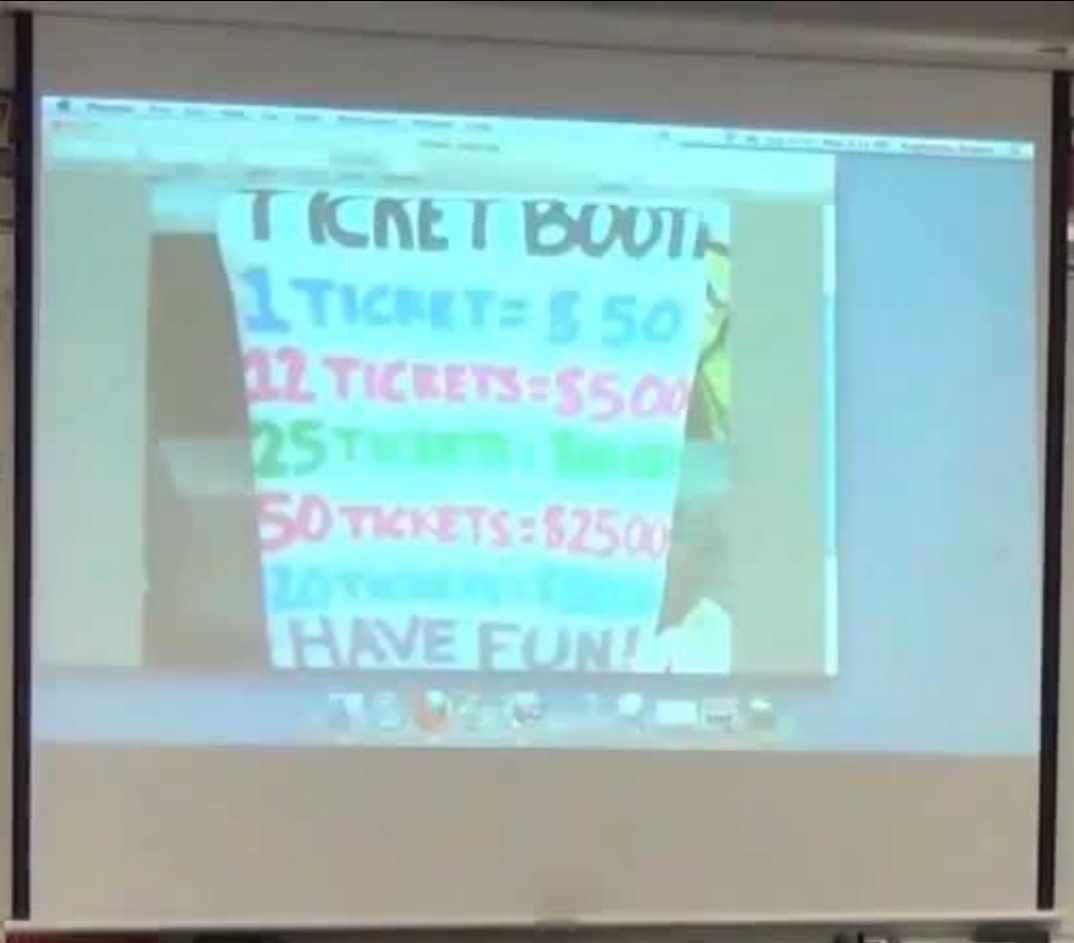
TICKET BOOTH
1 TICKET = \$ 50
12 TICKETS = \$ 500
25 TICKETS = \$ 1250
50 TICKETS = \$ 2500
20 TICKETS = \$ 1000
HAVE FUN!

PLACE VALUE SYSTEM																				
Billions			Millions			Thousands			Units			Tenths			Hundredths			Thousandths		
10 ⁹	10 ⁸	10 ⁷	10 ⁶	10 ⁵	10 ⁴	10 ³	10 ²	10 ¹	10 ⁰	10 ⁻¹	10 ⁻²	10 ⁻³	10 ⁻⁴	10 ⁻⁵	10 ⁻⁶	10 ⁻⁷	10 ⁻⁸	10 ⁻⁹		

3/11/14 agenda
Mr. [unclear]
40 objectives

7 th Grade	8 th Grade
Video Lesson	Video Lesson
Homework	Homework





PLACE VALUE SYSTEM																			
ns	Billions			Millions			Thousands			Units		Thousandths		Millionths		Billionths		Trillionths	
	10^9	10^8	10^7	10^6	10^5	10^4	10^3	10^2	10^1	10^0	10^{-1}	10^{-2}	10^{-3}	10^{-6}	10^{-9}	10^{-12}	10^{-15}	10^{-18}	10^{-21}


3/17/14 Agenda


7th Grade	8th Grade
Video Lesson	Video Lesson
Homework	Homework

Mr. Kaplowitz

4/6 objectives due by 4/30


- # of tickets for a ride
- How many rides can you go on
- How much money you need
- # of people in group
- How long you will stay





Setting Up The Problem

- What do you do when students ask for data/information you don't have, hadn't considered, or forgot to get?
- What do you do when students ask for information that is probably not important or that they don't actually need?
- What do you do when students don't know what to write for what they know and don't know?
- What do you do when you ask for a guess and they don't know?
- What do you do when they don't ask you for information that they need to solve the problem?



Problem Solving Process

- What do you do when students don't use the strategy you anticipated they would use?

TICKET BOOTHS

1 TICKET = \$.50


12 TICKETS = \$5.00

25 TICKETS = \$10.00

50 TICKETS = \$25.00

120 TICKETS = \$50.00

HAVE FUN!





American Standard

Item | Artículo: 84065
Model | Modelo: 3381.216.020

Clean™ Cadet® 3

Overall dimensions: 15 in W x 31 in H x 29-3/4 in D
Rough-in dimensions: 12 in
Trapway size: 2 in

Dimensiones generales: 38,10 cm de ancho x 78,74 cm de alto x 75,57 cm de profundidad
Dimensiones aproximadas: 30,48 cm
Tamaño de canal de sifón: 5,08 cm

- High-efficiency, dual flush toilet—1.6 gal. or 1.0 gal. flush
- Stays cleaner longer with EverClean® surface & PowerWash™ flush
- Features No Tools™ installation
- ADA approved chair height

- Inodoro de descarga doble de alta eficiencia con descarga de 6,06 litros o 3,79 litros
- Permanece limpio por más tiempo con la superficie EverClean® y la descarga PowerWash™
- Cuenta con instalación No Tools™
- Altura de silla aprobada por ADA

\$199 Everyday Low Price

CLEAN CADET 3 DUAL FLUSH CH EL H
AISEL DAY LOC
40 W 1

WaterSense
Meets EPA Criteria

Certified by IAPMO RWT
CertiMark por IAPMO RWT

Recorder # P117364

10 Year Año Limited Warranty Garantía limitada

Elongated Alergada 18.5 in 46.99 cm

Chair Height Altura de silla 16.5 in 41.91 cm



American Standard

Item | Artículo: 88575
Model | Modelo: 2514.101.020

Clean™ Cadet® 3

Overall dimensions: 15-3/4 in W x 30-3/4 in H x 30-1/4 in D
Rough-in dimensions: 12 in
Trapway size: 2-1/16 in

Dimensiones generales: 40,01 cm de ancho x 78,11 cm de alto x 76,84 cm de profundidad
Dimensiones aproximadas: 30,48 cm
Tamaño de canal de sifón: 5,24 cm

- Smooth-sided toilet design
- Stays cleaner longer with EverClean® surface & PowerWash™ flush
- Features No Tools™ installation
- ADA approved chair height

- Diseño de inodoro de lados lisos
- Permanece limpio por más tiempo con la superficie EverClean® y la descarga PowerWash™
- Cuenta con instalación No Tools™
- Altura de silla aprobada por ADA

\$239 Everyday Low Price

ASD CLEAN CADET3 EL CH 1.28GPF
AISEL DAY LOC
40 W 5

WaterSense
Meets EPA Criteria

Certified by IAPMO RWT
CertiMark por IAPMO RWT

Recorder # P117363

10 Year Año Limited Warranty Garantía limitada

Elongated Alergada 18.5 in 46.99 cm

Chair Height Altura de silla 16.5 in 41.91 cm




Problem Solving Process

- What do you do when students don't use the strategy you anticipated they would use?
- What do you do when a student comes up with a strategy for solving the problem that you do not understand?

HIGH SCORE

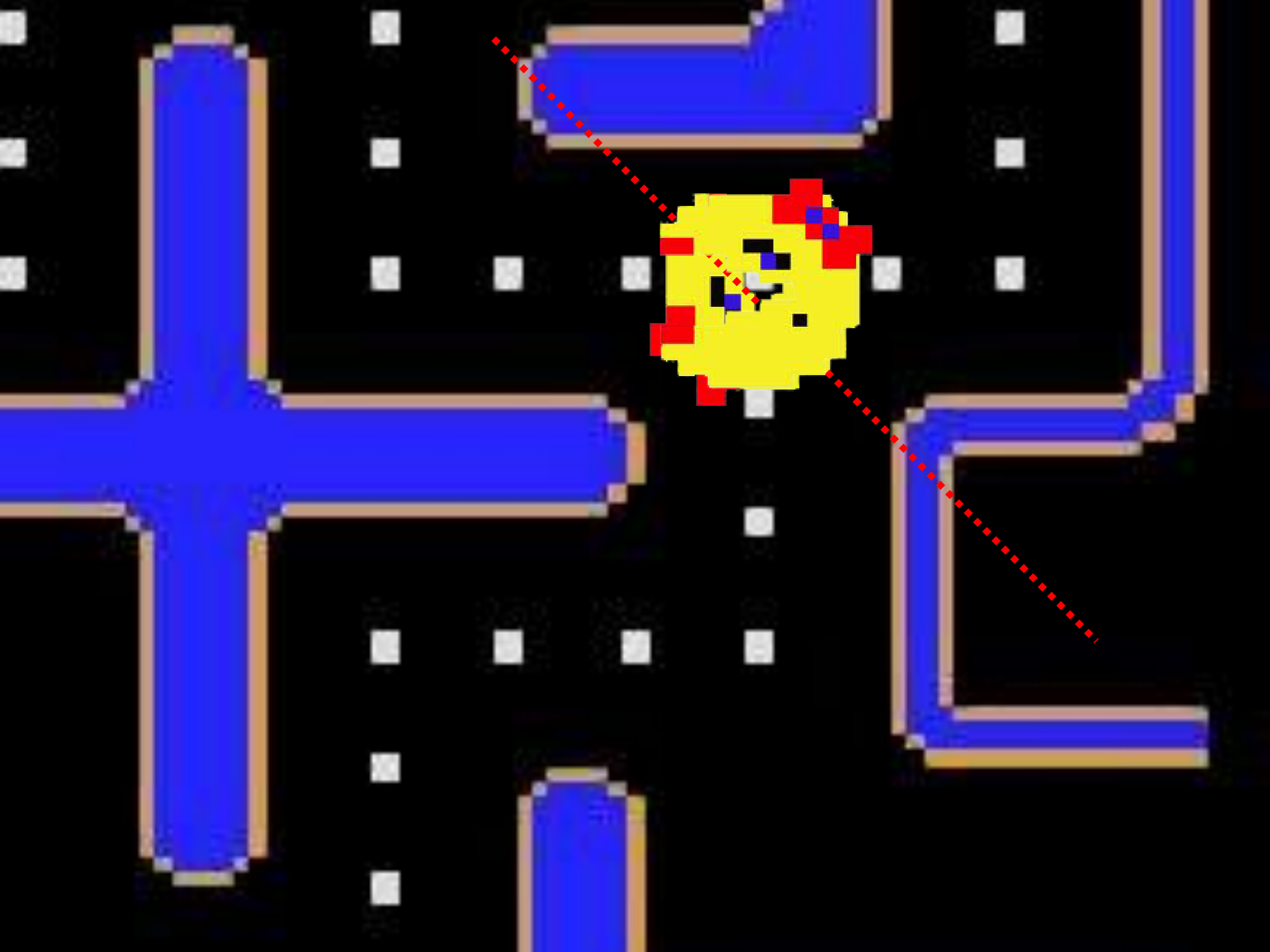
36550

800











Problem Solving Process

- What do you do when students don't use the strategy you anticipated they would use?
- What do you do when a student comes up with a strategy for solving the problem that you do not understand?
- What do you do when the answer we calculate does not match with the actual answer?
- What do you do when students get stuck during the problem solving process and are not sure what to do?

Problem Solving Process

- What do you do when students don't use the strategy you anticipated they would use?
- What do you do when a student comes up with a strategy for solving the problem that you do not understand?
- What do you do when the answer we calculate does not match with the actual answer?
- What do you do when students get stuck during the problem solving process and are not sure what to do?
- What do you do when you ask students questions and few to no people are ready to respond?

Problem Solving Process

- What do you do when students don't use the strategy you anticipated they would use?
- What do you do when a student comes up with a strategy for solving the problem that you do not understand?
- What do you do when the answer we calculate does not match with the actual answer?
- What do you do when students get stuck during the problem solving process and are not sure what to do?
- What do you do when you ask students questions and few to no people are ready to respond?
- What do you do when the student conclusions are low quality and/or effort?

20% OFF

FOR LOCATIONS NEAREST YOU
visit bedbathandbeyond.com
and click on Store Locator or call
1-800-GO BEYOND®
(1-800-462-3966)


BED BATH & BEYOND®

Beyond any store of its kind.®

Offices: 650 Liberty Ave., Union, NJ 07083

PRSR STD
U.S. POSTAGE
PAID
BED BATH &
BEYOND

**Take 20% off
one single item.**
Present this coupon.



10157 73283 94566 13028

Also excludes Starbucks
Also excludes Dyson vacuums and Miele

Valid for in-store use only. Copies not accepted. Limit one coupon, Savings Certificate, special offer or discount (including price match) per item. Coupon must be surrendered at time of purchase; any return of purchase will reduce your savings proportionally. The discount cannot be applied to gift cards, shipping, or sales tax. Offer excludes the following: Alessi, Arthur Court, Breville®, Britto™ Collection, Brookstone®, DKNY, kate spade, Kenneth Cole Reaction Home, Kosta Boda, Le Creuset®, Lladró®, Monique Lhuillier, Nambe®, Nautica®, Orrefors, Riedel, Shun, Starbucks® Electrics, Swarovski, T-Tech, Vera Wang®, Victorinox Luggage, Vitamix, Waterford®, Wusthof®, or Zwilling; Argington®, babybrezza™, Baby Jogger™, BÉABA®, BOB, Bugaboo, Bumbleride™, ERGObaby®, Foundations®, iCandy®, Maxi-Cosi®, Mountain Buggy, Oeuf, Orbit Baby™, Peg Pérego®, Phil & Teds®, Plan Toys®, Quinny®, Svan®, Teutonia®, Under Armour®, UPPAbaby®, baby furniture, diapers, wipes, formula, baby food or portrait studio services.

G47QR-V2

BBC31313

\$5 OFF

any purchase
of \$15 or more.

Present this coupon.

FOR LOCATIONS NEAREST YOU
visit bedbathandbeyond.com and
click on Store Locator or call
1-800-GO BEYOND® (1-800-462-3966)



VALID FOR IN-STORE USE ONLY.



16150 81283 94566 13112

Also excludes Dyson vacuums and Miele

BED BATH & BEYOND®

Beyond any store of its kind.®

OFFICES: 650 LIBERTY AVENUE, UNION, NJ 07083

PRSR STD
U.S. POSTAGE
PAID
BED BATH & BEYOND

Valid for in-store use only. Copies not accepted. Limit one coupon, Savings Certificate, special offer or discount (including price match) per item. Coupon must be surrendered at time of purchase; any return of purchase will reduce your savings proportionally. The price of gift cards, shipping, or sales tax are not counted toward any minimum purchase required, and coupon cannot be applied to such items. Offer excludes the following: Alessi, Arthur Court, Breville®, Britto™ Collection, Brookstone®, DKNY, kate spade, Kenneth Cole Reaction Home, Kosta Boda, Le Creuset®, Lladró®, Monique Lhuillier, Nambe®, Nautica®, Orrefors, Riedel, Shun, Swarovski, T-Tech, Vera Wang®, Victorinox Luggage, Vitamix®, Waterford®, Wusthof®, or Zwilling; Baby Brezza®, Baby Jogger™, BÉABA®, BOB, Bugaboo, Bumbleride™, Destination Maternity®, ERGObaby®, Foundations®, Maxi-Cosi®, Mountain Buggy, Oeuf, Orbit Baby™, Peg Pérego®, Petunia Pickle Bottom®, Phil & Teds®, Quinny®, Svan®, Teutonia®, Under Armour®, UPPAbaby®, baby furniture, diapers, wipes, formula, baby food or portrait studio services.

What is your conclusion? How did you reach that conclusion?

IA conclusion each for different items
CONCLUSION Each Item is good

in store purchase, exclusions

What is your conclusion? How did you reach that conclusion?

If the item is \$15 use the \$5 off because

$$15 - 5 = 10 \text{ and } 15 - 20\% = 12$$

If the item is \$47 it is better to use the 20% off coupon because

$$47 - 5 = 42 \quad 47 - 20\% = 37.60$$

\$5 off 20% off
42 vs 37.60

$$\begin{array}{ll} \$5 \text{ off} & 20\% \text{ off} \\ 18 \text{ vs } & 18.40 \end{array}$$

$$23 - 5 = 18$$

$$23 - 20\% = 18.40$$

Orange Chicken	5.25	🔪 Eggplant with Garlic Sauce	5.25
Chicken Lo Mein	5.25	🔪 Ma Po Tofu	5.25
Cashew Nut Chicken	5.25	🔪 Broccoli with Garlic Sauce	5.25
🔪 Pungent Chicken	5.25	🔪 String Bean with Garlic Sauce	5.25
Sweet & Sour Chicken	5.25	Vegetable Delight	5.25
Curry Chicken	5.25	Bamboo Fungus Tofu	5.25
Lemon Chicken	5.25	Shrimp with Asparagus	6.25
Vegetable Chicken	5.25	Shrimp with Lobster Sauce	6.25
Mongolian Beef	5.25	🔪 Fish Fillet with Szuchuan Sauce	6.25
Broccoli Beef	5.25	🔪 Fish Fillet with Black Bean Sauce	6.25
🔪 Pungent Beef	5.25	Crab meat with Asparagus	6.25
Sweet & Sour Pork	5.25	Sweet & Sour Shrimp	6.25

FREE
ORANGE
CHICKEN

WITH COUPON

with purchase from
\$50+tax/up

Not redeemable on lunch &
special dinners & party items or
with any other coupon
exp. 3/31/07

FREE
CHICKEN
L.O MEIN

WITH COUPON

with purchase from
\$25+tax/up

Not redeemable on lunch &
special dinners & party items or
with any other coupon
exp. 3/31/07

FREE

Cheese Wonton

WITH COUPON

with purchase from
\$25+tax/up

Not redeemable on lunch &
special dinners & party items or
with any other coupon
exp. 3/31/07

10% OFF **10% OFF**

WITH COUPON

WITH COUPON

with purchase from
\$20+tax/up

Not redeemable on lunch &
special dinners & party items or
with any other coupon
exp. 3/31/07

with purchase from
\$20+tax/up

Not redeemable on lunch &
special dinners & party items or
with any other coupon
exp. 3/31/07

Free ~~to~~ chicken lomein
if spend \$25 and not redeemable
on lunch, special dinners and
party items

and chicken 10 main.

What is your conclusion? How did you reach that conclusion?

The 10% carbon is best with high
prices and small orders is best
with the free chicken lomein or chesse warden

What is your conclusion? How did you reach that conclusion?

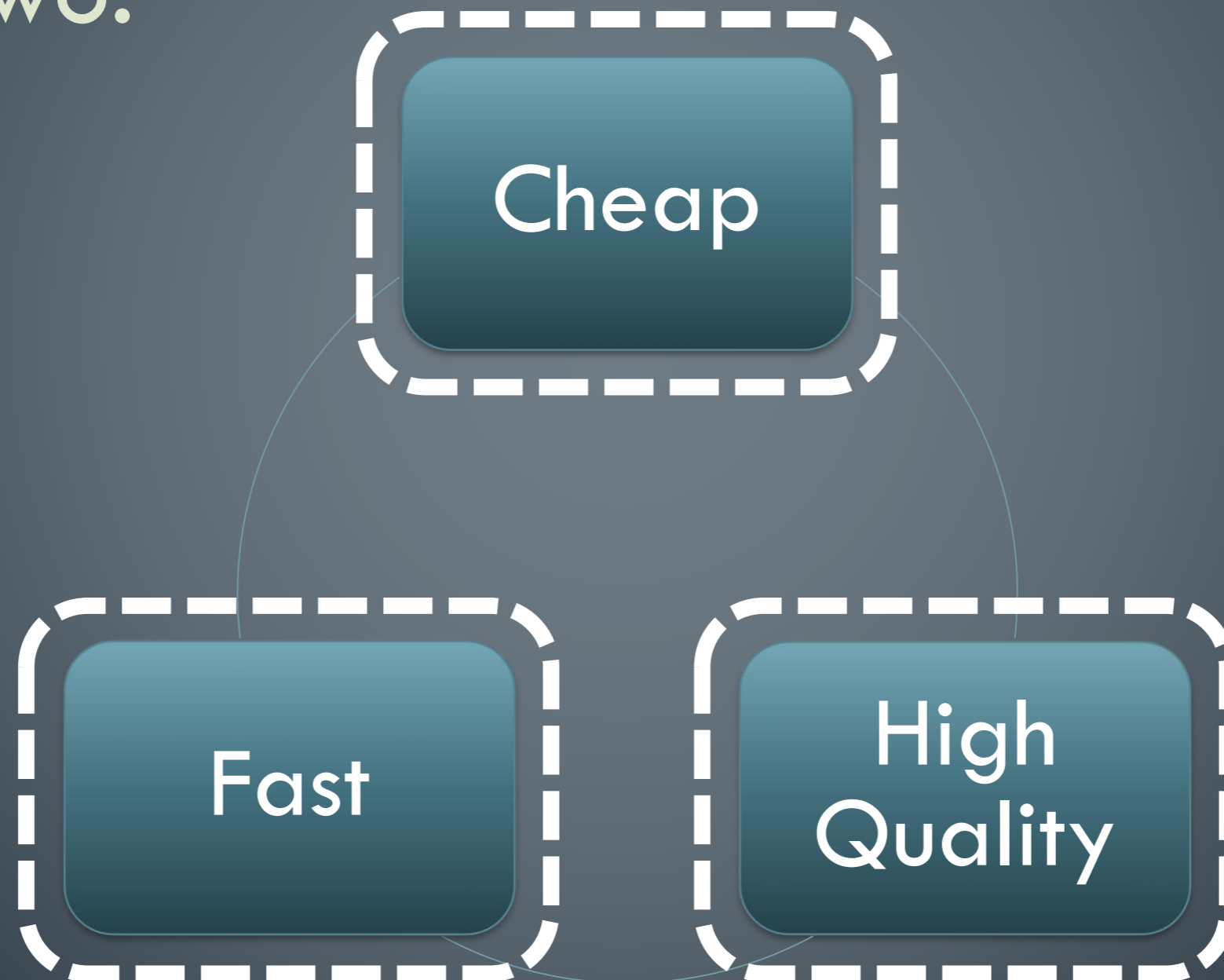
You can use the 10% off when you pay 20-24.99 or more
the Free chicken Lorraine when you pay 25-49.99 or more
and the Free orange Chicken when you pay 50 or more.

Goals

- ✓ Engaging problem solving
 - ✓ Real world problem-based learning
 - ✓ Higher depth of knowledge problems
- ✓ Better implementation
 - ✓ Improve our ability to ask questions
 - ✓ Practice preparing to implement a lesson
 - ✓ Figure out how to deal with uncomfortable situations

Construction

- Pick two:



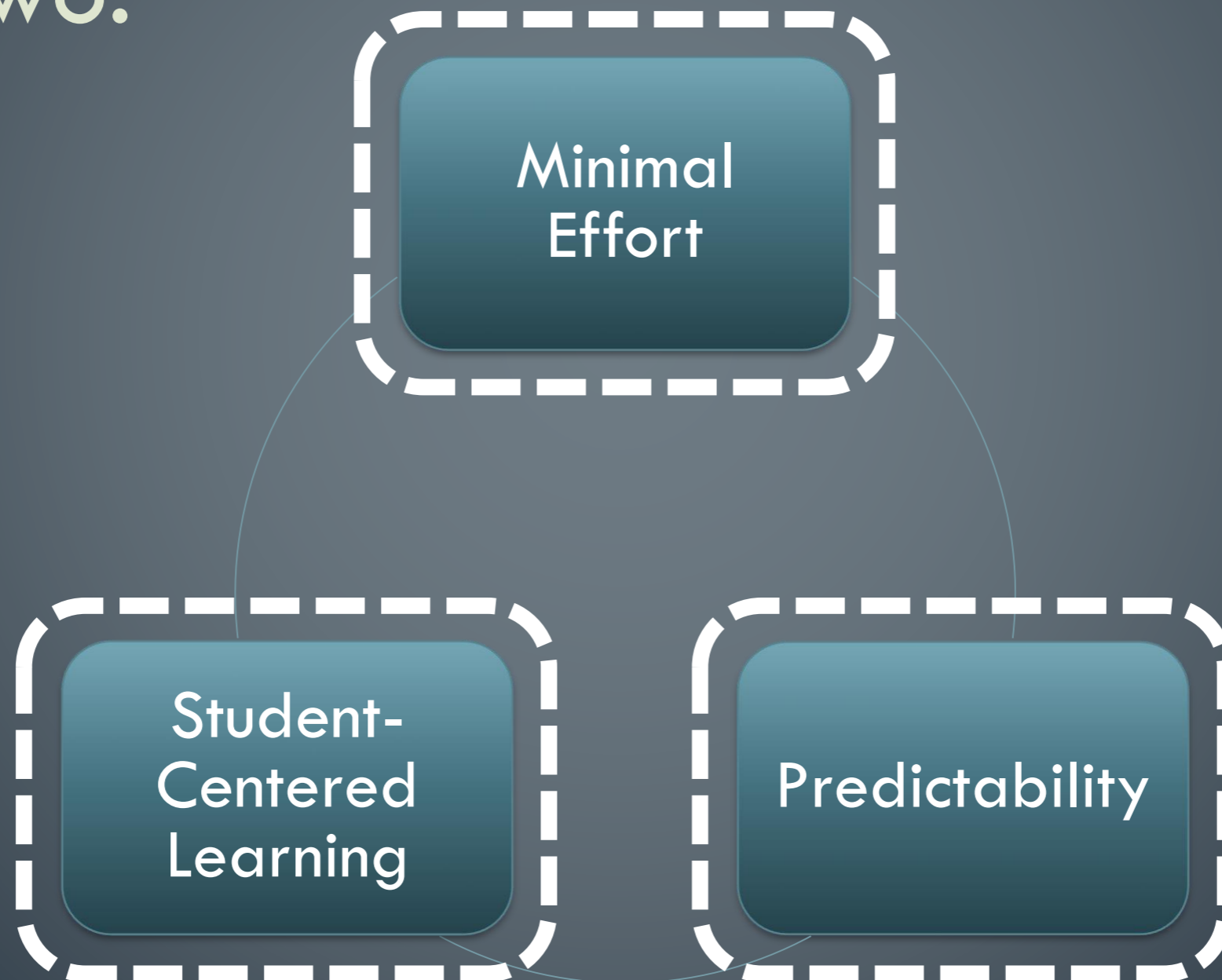
Family

- Pick two:



Problem-Based Learning

- Pick two:



Call to Action



- ▶ Implement one problem-based lesson in your classroom in the next two weeks of school.
- ▶ Implement one DOK 2 or DOK 3 problem in your classroom in the next two weeks of school.

Contact

Robert Kaplinsky



robert@robertkaplinsky.com



robertkaplinsky.com/gw



[@robertkaplinsky](https://www.facebook.com/robertkaplinsky)

